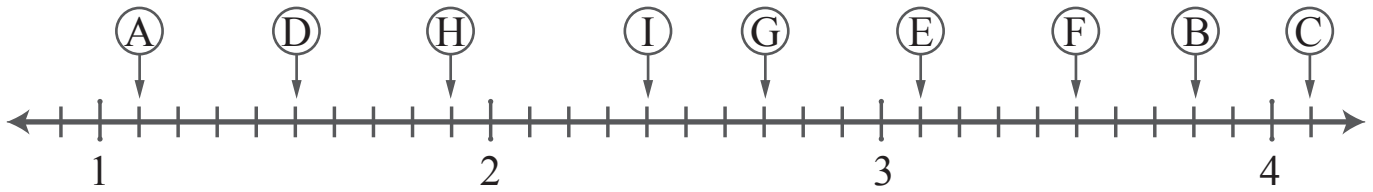


Decimal Number Line (Tenths)

Name: _____ Score: _____

Write the correct decimal number for each letter



$A = \square$

$D = \square$

$G = \square$

$B = \square$

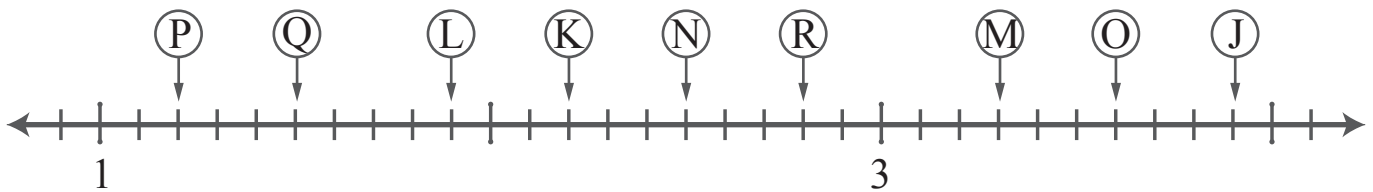
$E = \square$

$H = \square$

$C = \square$

$F = \square$

$I = \square$



$J = \square$

$M = \square$

$P = \square$

$K = \square$

$N = \square$

$Q = \square$

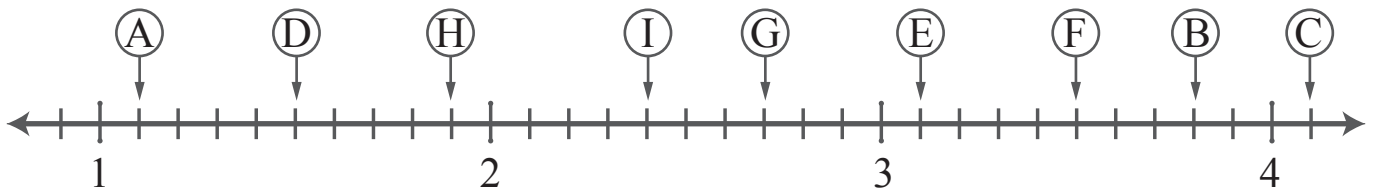
$L = \square$

$O = \square$

$R = \square$

Answers

Write the correct decimal number for each letter



$A = 1.1$

$D = 1.5$

$G = 2.7$

$B = 3.8$

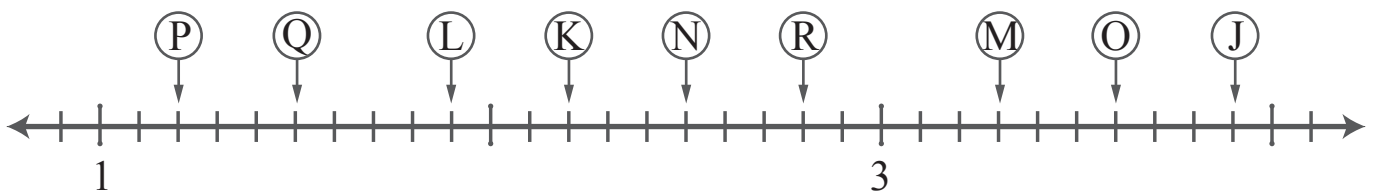
$E = 3.1$

$H = 1.9$

$C = 4.1$

$F = 3.5$

$I = 2.4$



$J = 3.9$

$M = 3.3$

$P = 1.2$

$K = 2.2$

$N = 2.5$

$Q = 1.5$

$L = 1.9$

$O = 3.6$

$R = 2.8$