



What Remainder Crossword

Find the Remainders and fill them in .



ACROSS


1. $210 \div 20$
2. $472 \div 30$
3. $911 \div 40$
5. $315 \div 25$
6. $462 \div 15$
7. $416 \div 20$
8. $535 \div 50$
9. $155 \div 12$
11. $616 \div 20$
12. $624 \div 30$

DOWN

1. $313 \div 15$
2. $521 \div 25$
3. $635 \div 60$
4. $272 \div 80$
5. $316 \div 20$
6. $495 \div 16$
7. $310 \div 30$
8. $531 \div 50$
9. $196 \div 18$
10. $294 \div 28$

Answers

Find the Remainders and fill them in .



¹ 1	0		² 2	2	
3		³ 3	1		⁴ 3
	⁵ 1	5		⁶ 1	2
⁷ 1	6		⁸ 3	5	
0		⁹ 1	1		¹⁰ 1
	¹¹ 1	6		¹² 2	4

ACROSS

1. $210 \div 20$
2. $472 \div 30$
3. $911 \div 40$
5. $315 \div 25$
6. $462 \div 15$
7. $416 \div 20$
8. $535 \div 50$
9. $155 \div 12$
11. $616 \div 20$
12. $624 \div 30$

DOWN

1. $313 \div 15$
2. $521 \div 25$
3. $635 \div 60$
4. $272 \div 80$
5. $316 \div 20$
6. $495 \div 16$
7. $310 \div 30$
8. $531 \div 50$
9. $196 \div 18$
10. $294 \div 28$