

Rounding Off to Nearest 10

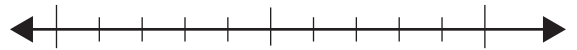
Name: _____ Score: _____

Use the number lines and round the numbers off to the nearest ten.

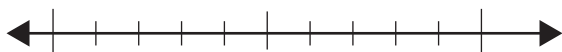
14



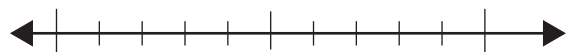
35



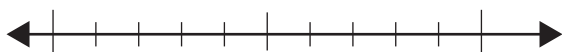
63



87




101




155



786



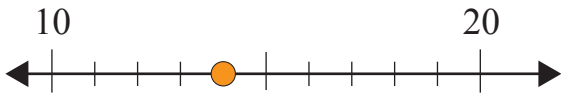
994



Answers

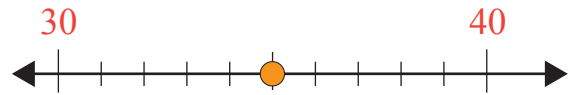
Use the number lines and round the numbers off to the nearest ten.

14



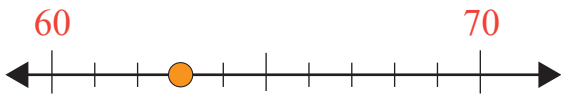
10

35



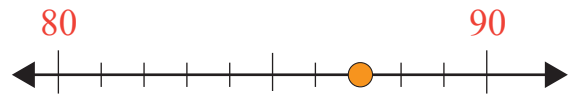
40

63



60

87



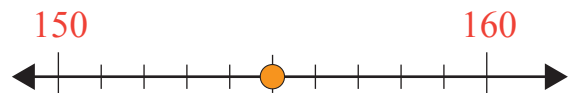
90

101



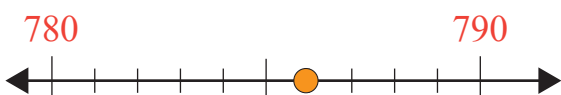
100

155



160

786



790

994



990