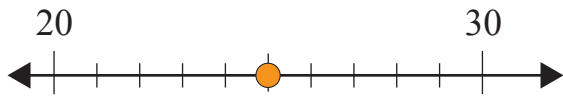


Rounding Off to Nearest 10

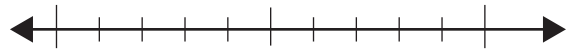
Name: _____ Score: _____

Use the number lines and round the numbers off to the nearest ten.

25



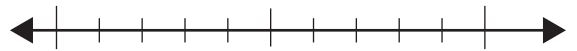
38



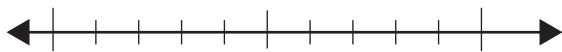
54



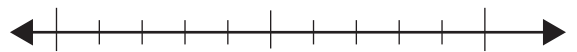
66




112



195



746



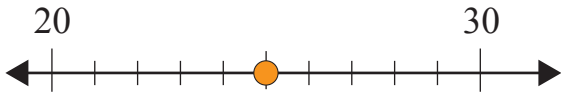
993



Answers

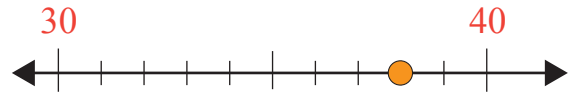
Use the number lines and round the numbers off to the nearest ten.

25



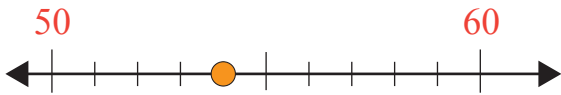
30

38



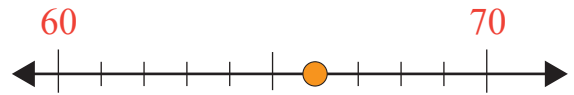
40

54



50

66



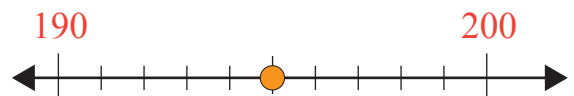
70

112



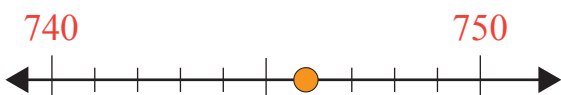
110

195



200

746



750

993



990