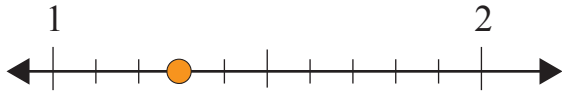


# Rounding Off to Nearest Whole Number

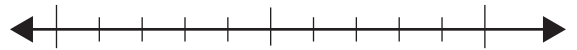
Name: \_\_\_\_\_ Score: \_\_\_\_\_

Use the number lines and round the numbers off to the nearest whole number.

1.3



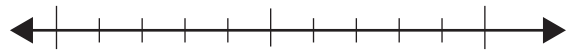
3.5



6.4



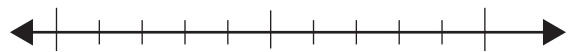
8.6



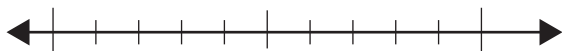
10.3



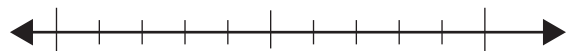
13.9



28.2



65.7



# Answers

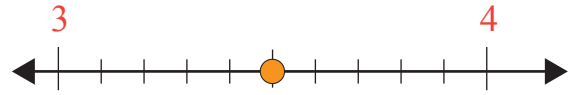
Use the number lines and round the numbers off to the nearest whole number.

1.3



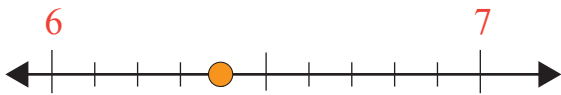
1

3.5



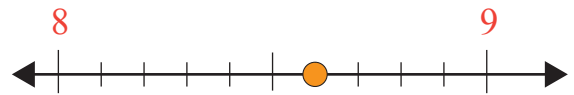
4

6.4



6

8.6



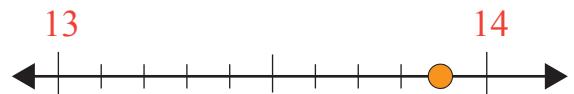
9

10.3



10

13.9



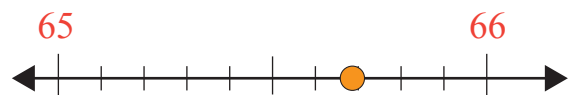
14

28.2



28

65.7



66