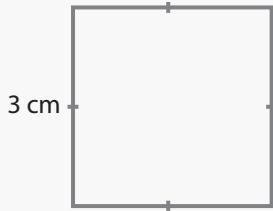


Area of Squares and Rectangles

Name: _____ Class: _____

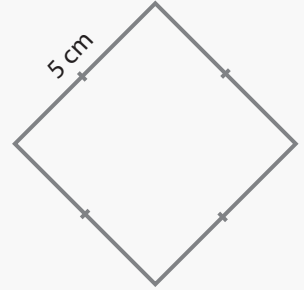
Find the area of the following squares and rectangles.



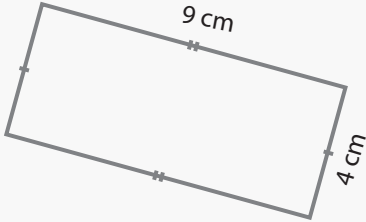
area: _____



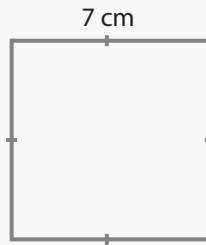
area: _____



area: _____



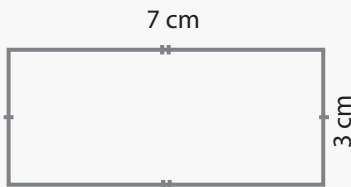
area: _____



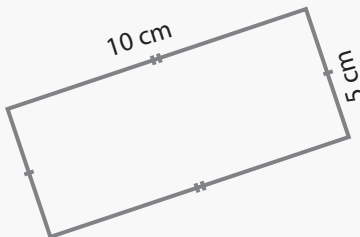
area: _____



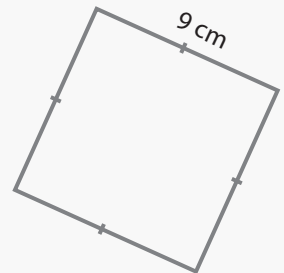
area: _____



area: _____



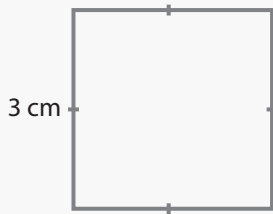
area: _____



area: _____

Answers

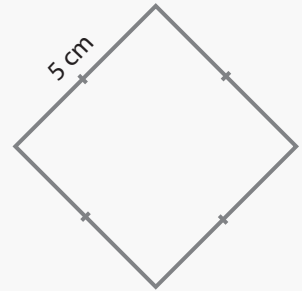
Find the area of the following squares and rectangles.



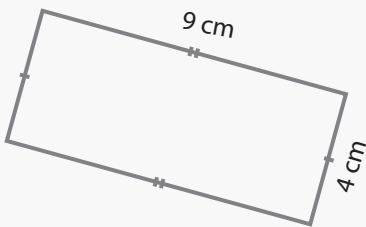
area: 9 cm²



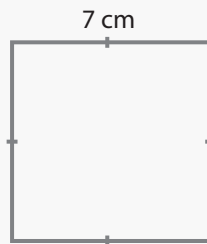
area: 16 cm²



area: 25 cm²



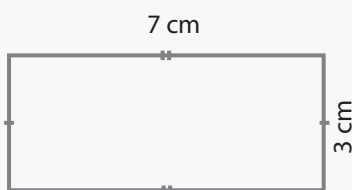
area: 36 cm²



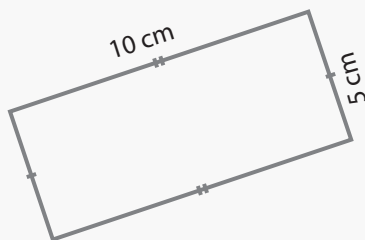
area: 49 cm²



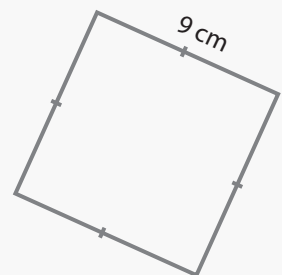
area: 27 cm²



area: 21 cm²



area: 50 cm²



area: 81 cm²