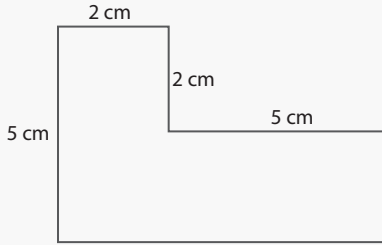


# Perimeter and Area of Compound Shapes

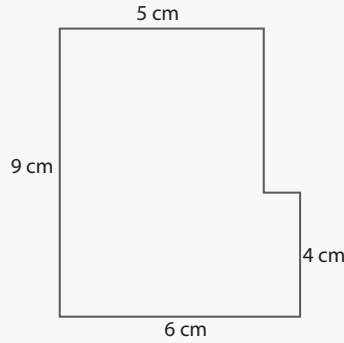
Name: \_\_\_\_\_ Class: \_\_\_\_\_

Find the perimeter and area of the following compound shapes (not drawn to scale). All shapes are made up of rectangles and squares.



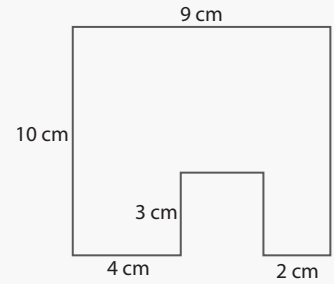
Perimeter: \_\_\_\_\_

Area: \_\_\_\_\_



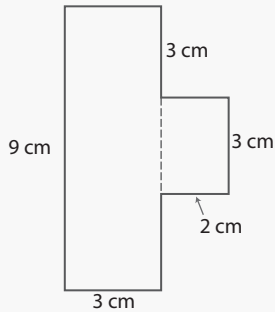
Perimeter: \_\_\_\_\_

Area: \_\_\_\_\_



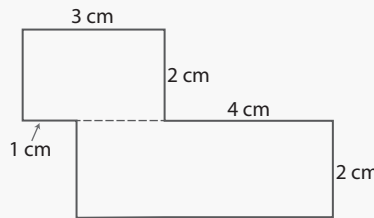
Perimeter: \_\_\_\_\_

Area: \_\_\_\_\_



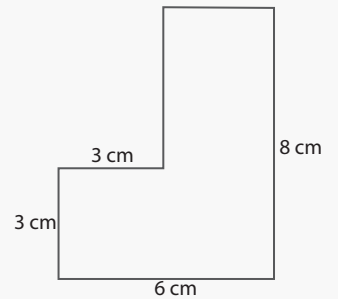
Perimeter: \_\_\_\_\_

Area: \_\_\_\_\_



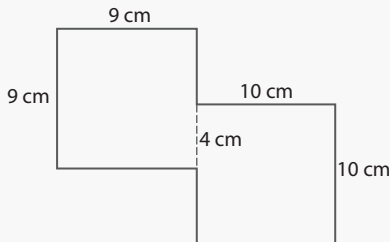
Perimeter: \_\_\_\_\_

Area: \_\_\_\_\_



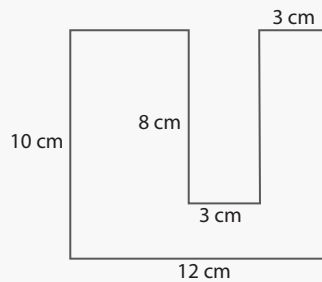
Perimeter: \_\_\_\_\_

Area: \_\_\_\_\_



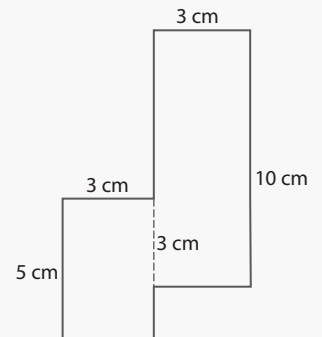
Perimeter: \_\_\_\_\_

Area: \_\_\_\_\_



Perimeter: \_\_\_\_\_

Area: \_\_\_\_\_

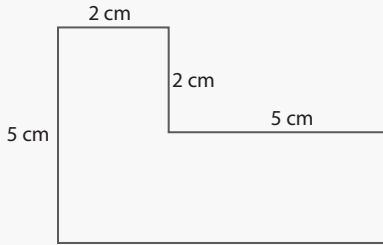


Perimeter: \_\_\_\_\_

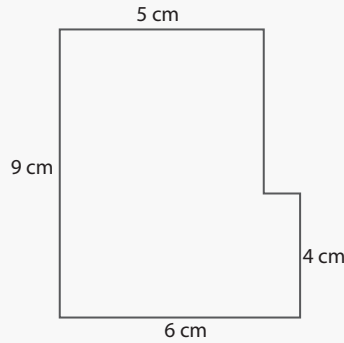
Area: \_\_\_\_\_

# Answers

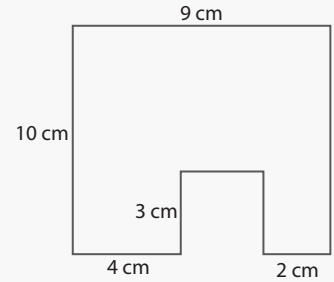
Find the perimeter and area of the following compound shapes (not drawn to scale). All shapes are made up of rectangles and squares.



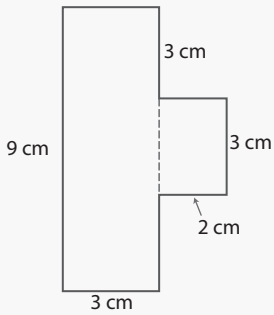
Perimeter: 24 cm  
Area: 25 cm<sup>2</sup>



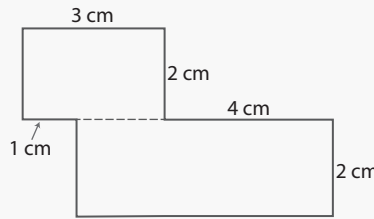
Perimeter: 30 cm  
Area: 49 cm<sup>2</sup>



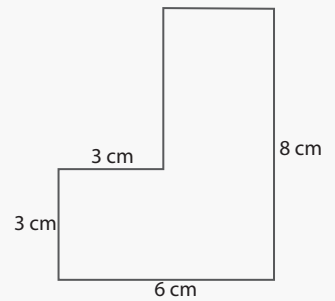
Perimeter: 44 cm  
Area: 81 cm<sup>2</sup>



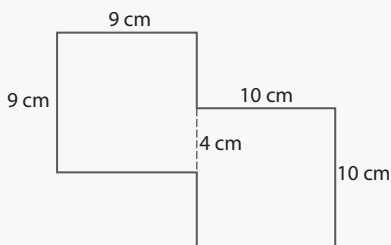
Perimeter: 28 cm  
Area: 33 cm<sup>2</sup>



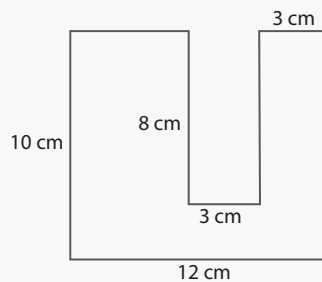
Perimeter: 22 cm  
Area: 18 cm<sup>2</sup>



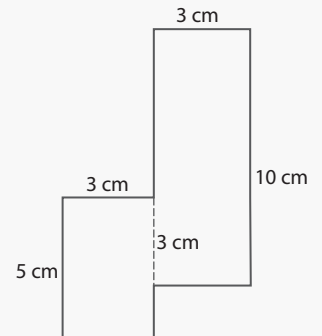
Perimeter: 28 cm  
Area: 33 cm<sup>2</sup>



Perimeter: 68 cm  
Area: 181 cm<sup>2</sup>



Perimeter: 60 cm  
Area: 96 cm<sup>2</sup>



Perimeter: 36 cm  
Area: 45 cm<sup>2</sup>