

Perimeter and Area of Compound Shapes

Name: _____ Class: _____

Find the perimeter and area of the following compound shapes (not drawn to scale). All shapes are made up of rectangles and squares.

Perimeter: _____
Area: _____

Perimeter: _____
Area: _____

Perimeter: _____
Area: _____

Perimeter: _____
Area: _____

Perimeter: _____
Area: _____

Perimeter: _____
Area: _____

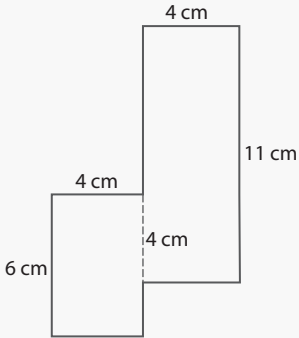
Perimeter: _____
Area: _____

Perimeter: _____
Area: _____

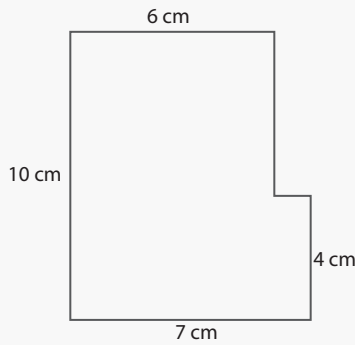
Perimeter: _____
Area: _____

Answers

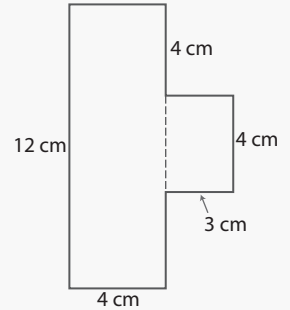
Find the perimeter and area of the following compound shapes (not drawn to scale). All shapes are made up of rectangles and squares.



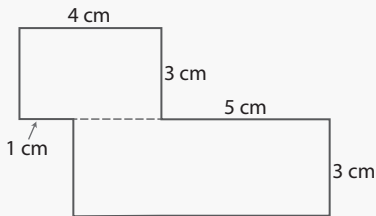
Perimeter: 42 cm
Area: 68 cm²



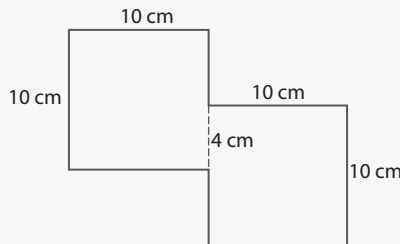
Perimeter: 34 cm
Area: 64 cm²



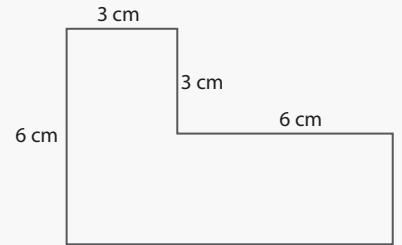
Perimeter: 38 cm
Area: 60 cm²



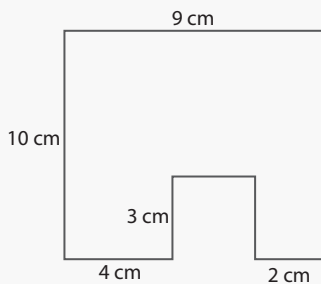
Perimeter: 30 cm
Area: 36 cm²



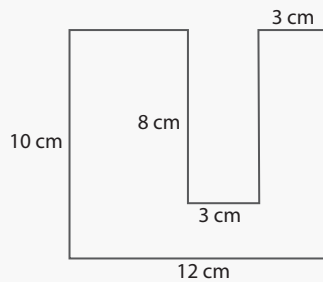
Perimeter: 72 cm
Area: 200 cm²



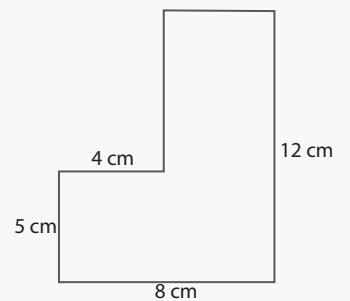
Perimeter: 30 cm
Area: 36 cm²



Perimeter: 44 cm
Area: 81 cm²



Perimeter: 60 cm
Area: 96 cm²



Perimeter: 40 cm
Area: 68 cm²