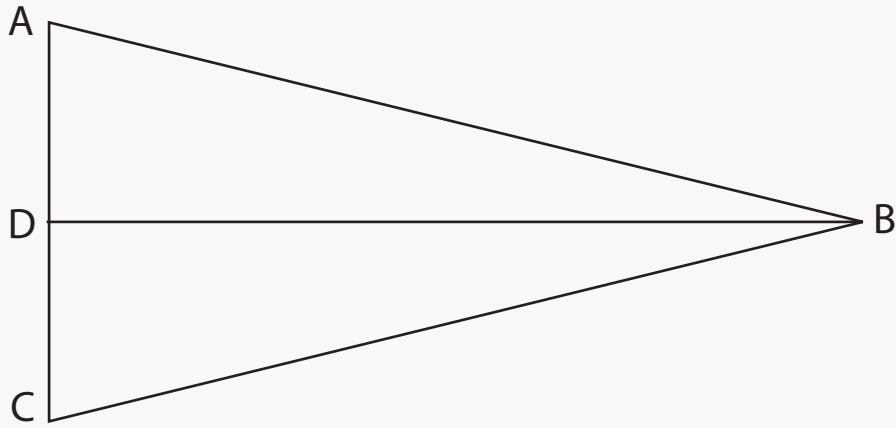


Find the Angles

Name: _____ Class: _____

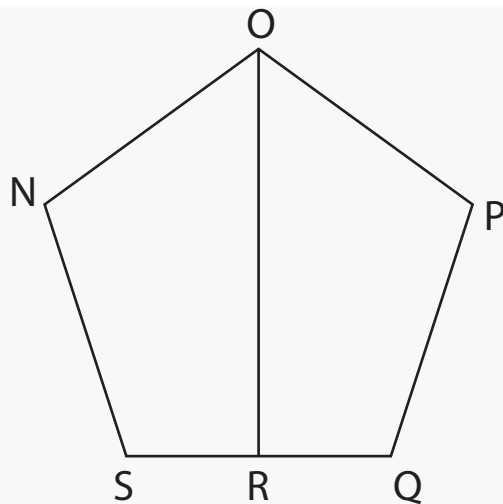
Look at the diagrams and find all acute, obtuse and right angles.



Acute:

Obtuse:

Right:



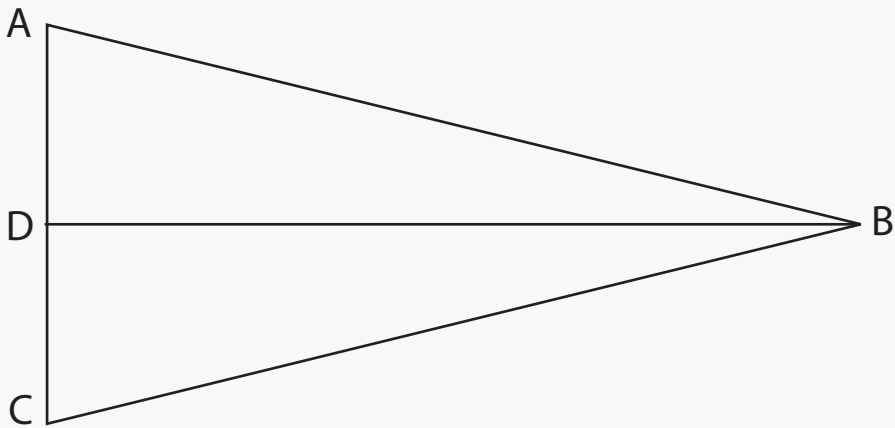
Acute:

Obtuse:

Right:

Answers

Look at the diagrams and find all acute, obtuse and right angles.



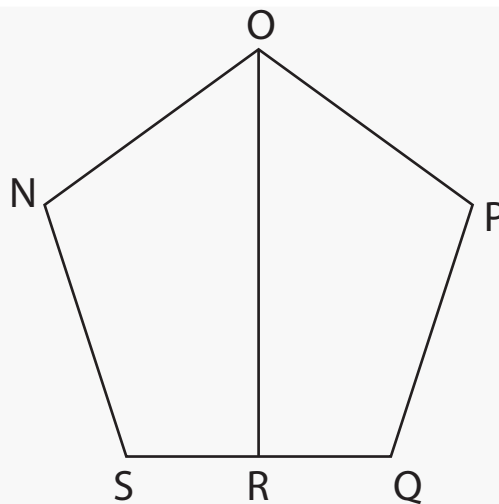
Acute:

$\angle ABC$ $\angle BCA$
 $\angle CAB$ $\angle CBD$
 $\angle ABD$ $\angle DCE$

Obtuse:

Right:

$\angle CDB$ $\angle BDA$



Acute:

$\angle NOR$ $\angle ROP$

Obtuse:

$\angle NOP$ $\angle OPQ$
 $\angle PQS$ $\angle QSN$
 $\angle SNO$

Right:

$\angle SRO$ $\angle QRO$