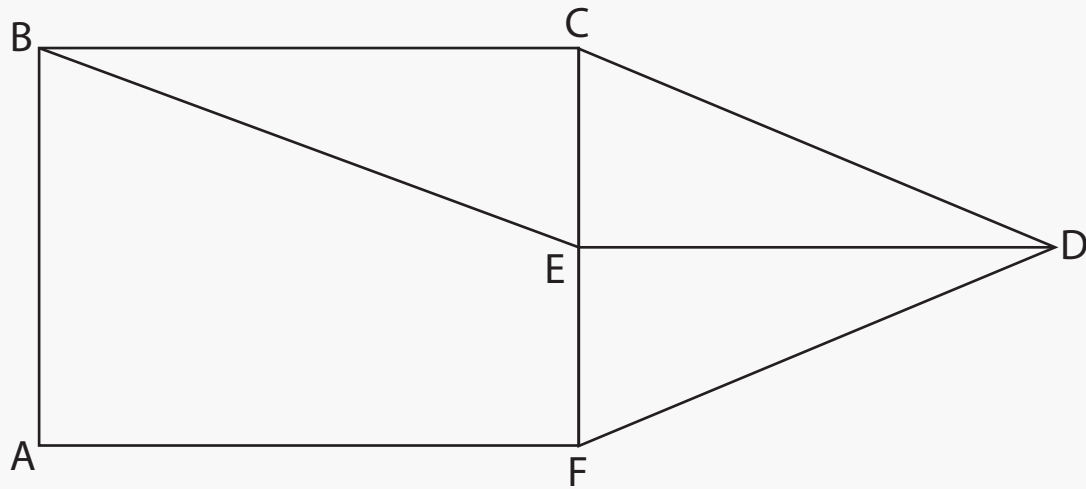


Find the Angles

Name: _____ Class: _____

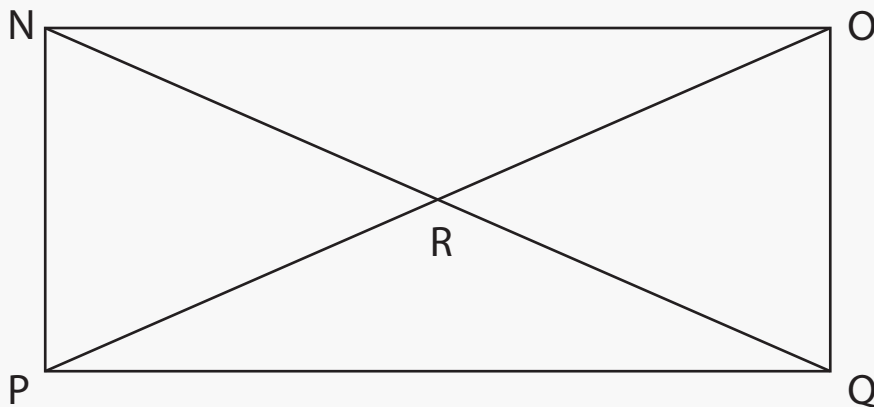
Look at the diagrams and find all acute, obtuse and right angles.



Acute:

Obtuse:

Right:



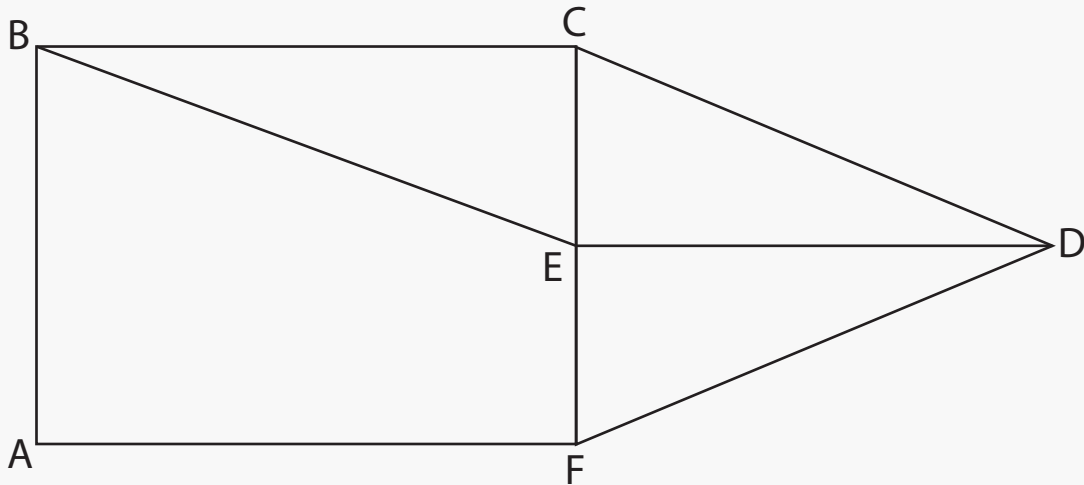
Acute:

Obtuse:

Right:

Answers

Look at the diagrams and find all acute, obtuse and right angles.



Acute:

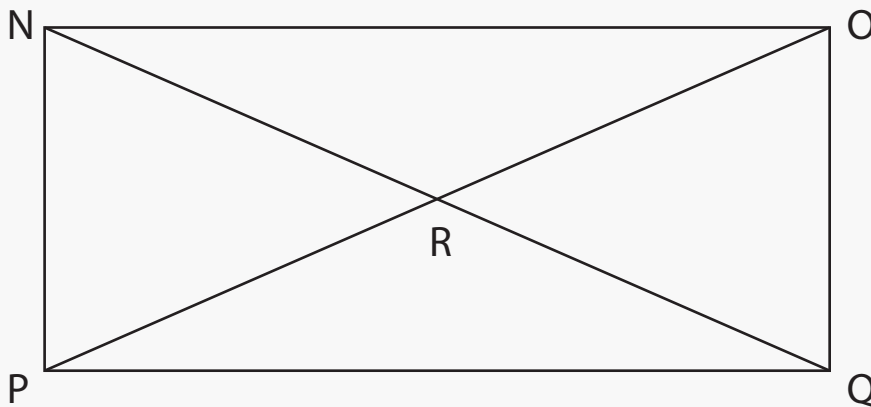
$\angle EBC$ $\angle CDE$
 $\angle EDF$ $\angle DFE$
 $\angle BEC$ $\angle DCE$
 $\angle ABE$

Obtuse:

$\angle FEB$ $\angle DEB$
 $\angle AFD$ $\angle BCD$

Right:

$\angle ABC$ $\angle CFA$
 $\angle BCF$ $\angle FAB$
 $\angle FED$ $\angle CED$



Acute:

$\angle RNP$ $\angle ONR$
 $\angle NPR$ $\angle OPR$
 $\angle NOR$ $\angle POQ$
 $\angle OQR$ $\angle PQR$
 $\angle NRO$ $\angle PRQ$

Obtuse:

$\angle PRQ$ $\angle NRO$

Right:

$\angle ONP$ $\angle NPQ$
 $\angle NOQ$ $\angle OQP$