

# Parallel, Intersecting and Perpendicular

Name: \_\_\_\_\_ Class: \_\_\_\_\_

Draw and label each line or point. Use your protractor when needed.

$\overleftrightarrow{AB} \perp \overleftrightarrow{DC}$

$\overleftrightarrow{EF} \parallel \overleftrightarrow{GH}$

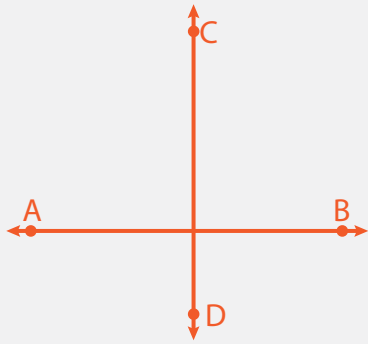
$\overleftrightarrow{KL}$  intersecting  $\overleftrightarrow{UV}$

$\overleftrightarrow{AC} \parallel \overleftrightarrow{DE}$

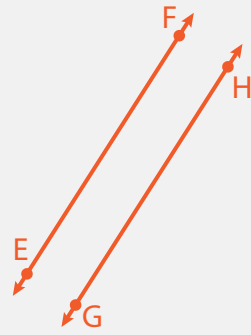
$\overleftrightarrow{AS}$  intersecting  $\overleftrightarrow{UN}$

$\overleftrightarrow{XY} \perp \overleftrightarrow{AZ}$


# Answers



$\overleftrightarrow{AB} \perp \overleftrightarrow{DC}$



$\overleftrightarrow{EF} \parallel \overleftrightarrow{GH}$



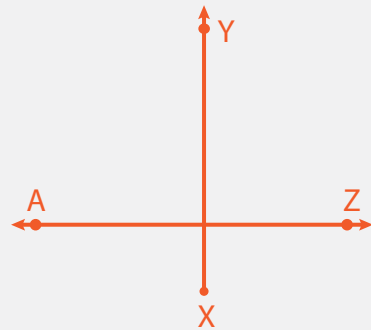
$\overleftrightarrow{KL}$  intersecting  $\overleftrightarrow{UV}$



$\overleftrightarrow{AC} \parallel \overleftrightarrow{DE}$



$\overleftrightarrow{AS}$  intersecting  $\overleftrightarrow{UN}$



$\overleftrightarrow{XY} \perp \overleftrightarrow{AZ}$