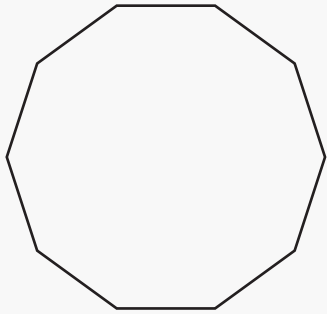


# Polygons and Sides

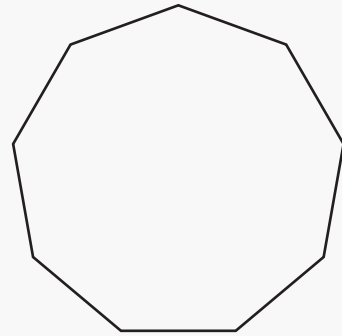
Name: \_\_\_\_\_ Class: \_\_\_\_\_

Name the following polygons and count the number of sides.



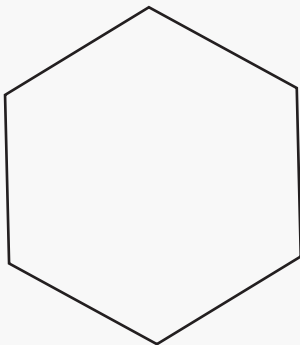
Name: \_\_\_\_\_

Sides: \_\_\_\_\_



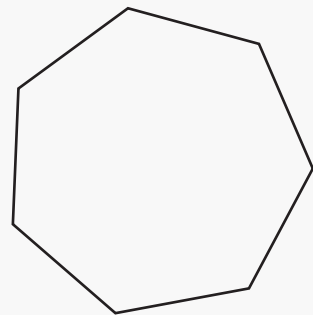
Name: \_\_\_\_\_

Sides: \_\_\_\_\_



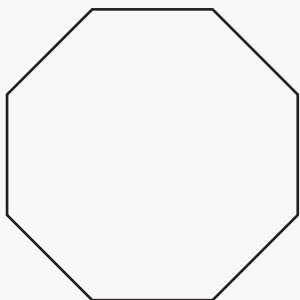
Name: \_\_\_\_\_

Sides: \_\_\_\_\_



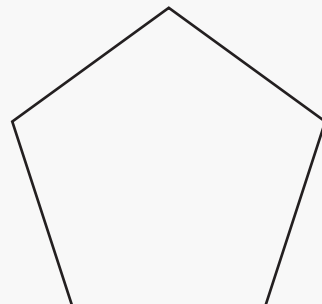
Name: \_\_\_\_\_

Sides: \_\_\_\_\_



Name: \_\_\_\_\_

Sides: \_\_\_\_\_

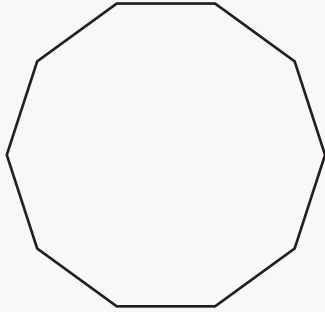


Name: \_\_\_\_\_

Sides: \_\_\_\_\_

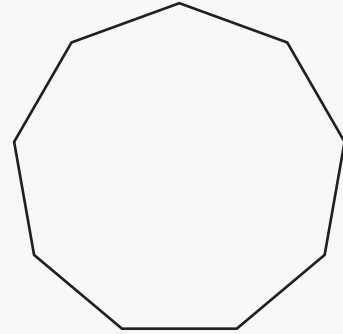
# Answers

Name the following polygons and count the number of sides.



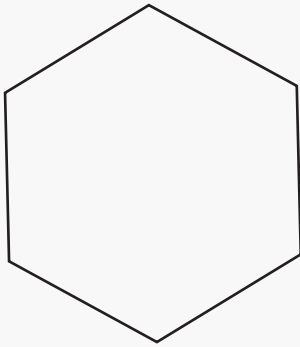
Name: decagon

Sides: 10



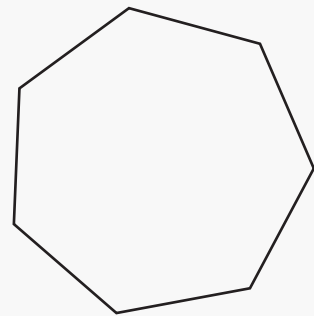
Name: nonagon

Sides: 9



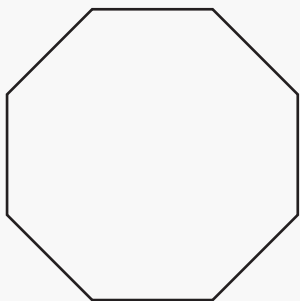
Name: hexagon

Sides: 6



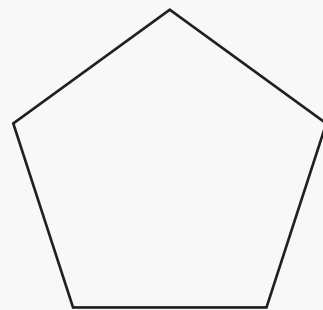
Name: heptagon

Sides: 7



Name: octagon

Sides: 8



Name: pentagon

Sides: 5