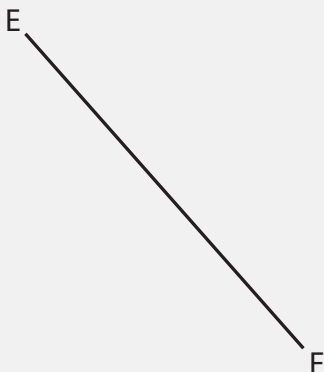

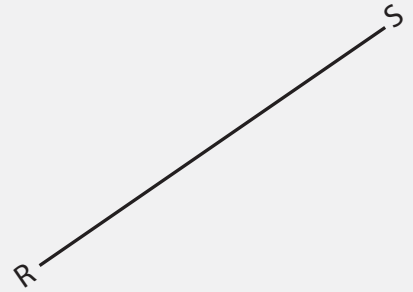


# Parallel Lines

Name: \_\_\_\_\_ Class: \_\_\_\_\_

Draw 3 parallel lines to each line (use your protractor!).



# Answers

Draw 3 parallel lines to each line (use your protractor!).

