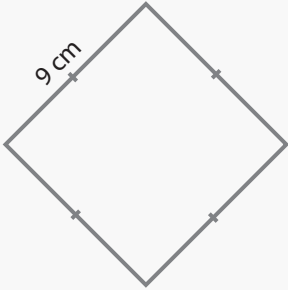


Perimeter and Area

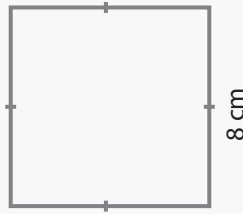
Name: _____ Class: _____

Find the area and perimeter area of the following squares and rectangles.



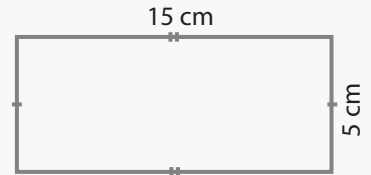
Perimeter: _____

Area: _____



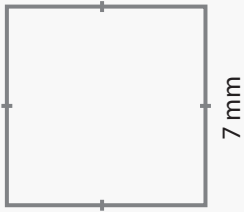
Perimeter: _____

Area: _____



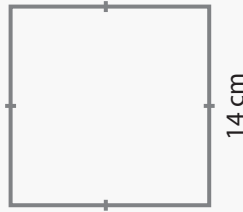
Perimeter: _____

Area: _____



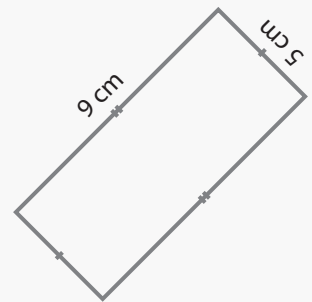
Perimeter: _____

Area: _____



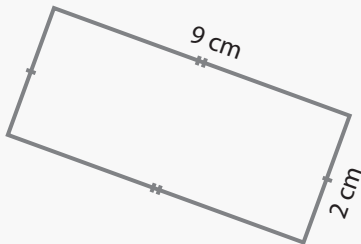
Perimeter: _____

Area: _____



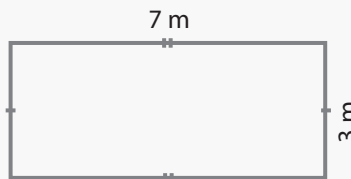
Perimeter: _____

Area: _____



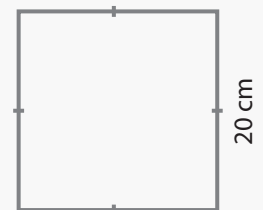
Perimeter: _____

Area: _____



Perimeter: _____

Area: _____

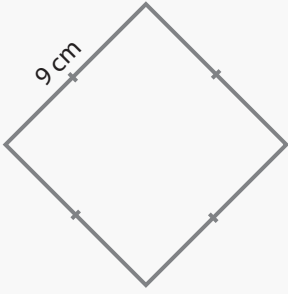


Perimeter: _____

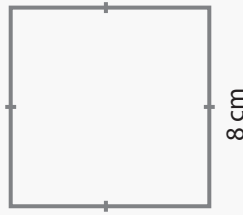
Area: _____

Answers

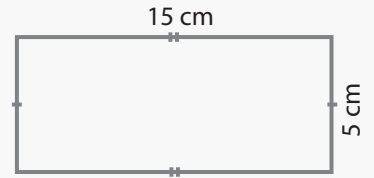
Find the area and perimeter area of the following squares and rectangles.



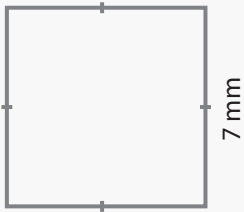
Perimeter: 36 cm
Area: 81 cm²



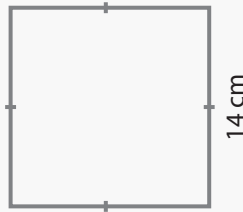
Perimeter: 32 cm
Area: 64 cm²



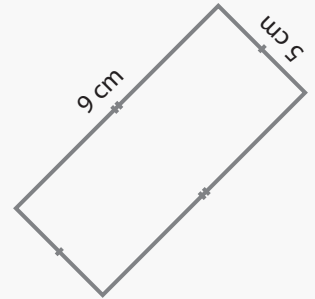
Perimeter: 40 cm
Area: 75 cm²



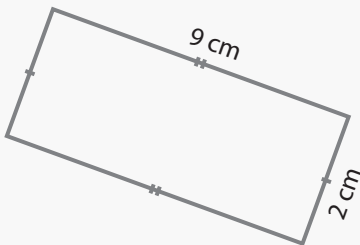
Perimeter: 28 mm
Area: 49 mm²



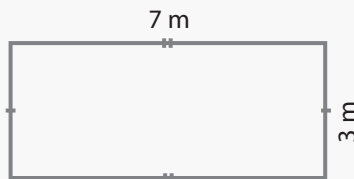
Perimeter: 56 cm
Area: 196 cm²



Perimeter: 28 cm
Area: 45 cm²



Perimeter: 22 cm
Area: 18 cm²



Perimeter: 20 m
Area: 21 m²



Perimeter: 80 cm
Area: 400 cm²