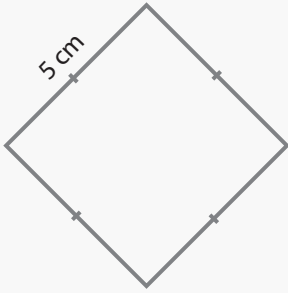


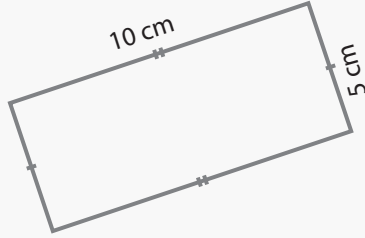
Perimeter of Squares and Rectangles

Name: _____ Class: _____

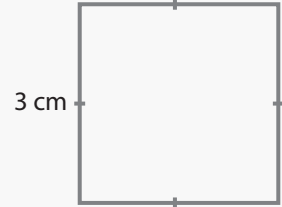
Find the perimeter of the following squares and rectangles.



perimeter: _____



perimeter: _____



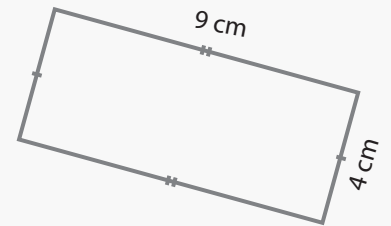
perimeter: _____



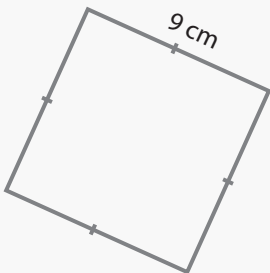
perimeter: _____



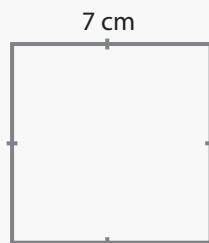
perimeter: _____



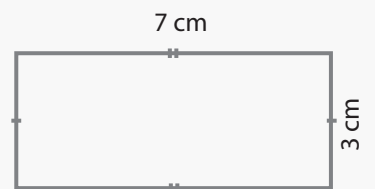
perimeter: _____



perimeter: _____



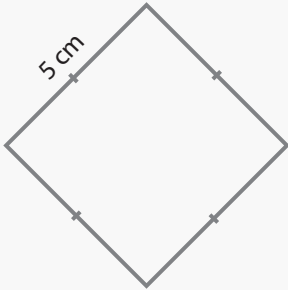
perimeter: _____



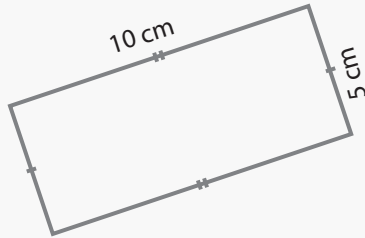
perimeter: _____

Answers

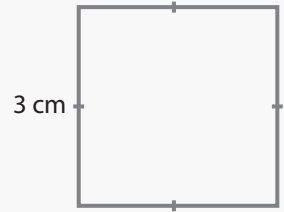
Find the perimeter of the following squares and rectangles.



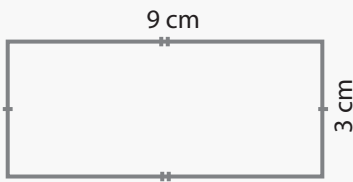
perimeter: 20 cm



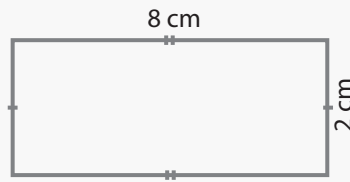
perimeter: 30 cm



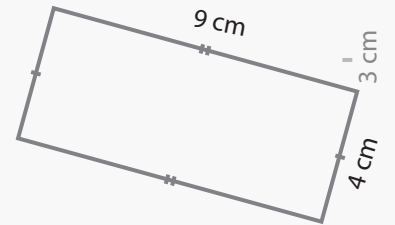
perimeter: 12 cm



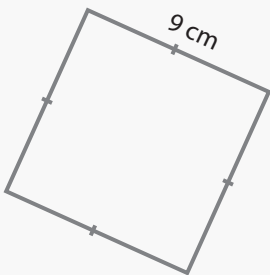
perimeter: 24 cm



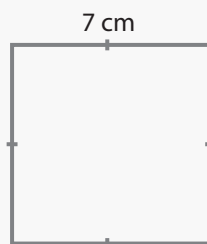
perimeter: 20 cm



perimeter: 26 cm



perimeter: 36 cm



perimeter: 28 cm



perimeter: 20 cm