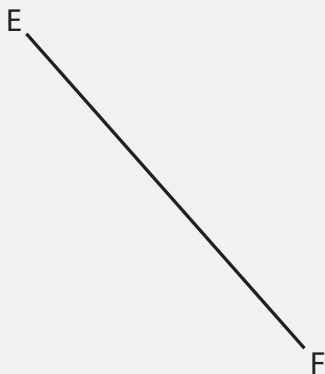

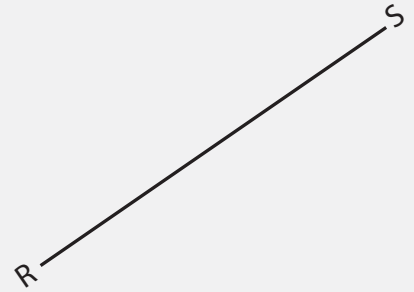


Perpendicular Lines

Name: _____ Class: _____

For each line, draw a perpendicular line to it (use your protractor!).



Answers

For each line, draw a perpendicular line to it (use your protractor!!)

