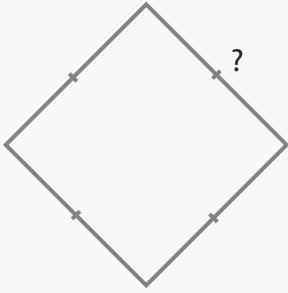


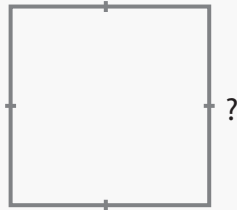
Unknown Side

Name: _____ Class: _____

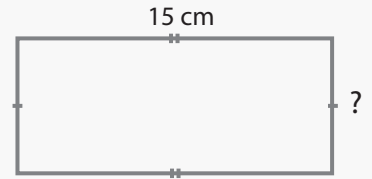
Find the length of the unknown sides given the perimeters of the following figures.



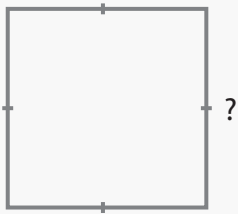
Perimeter: 20 cm
length ? : _____



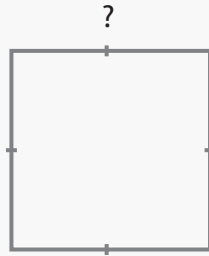
Perimeter: 32 cm
length ? : _____



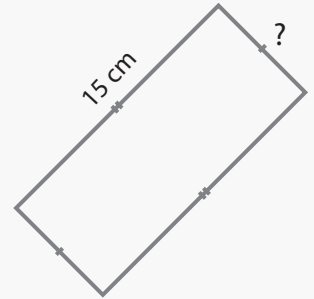
Perimeter: 40 cm
length ? : _____



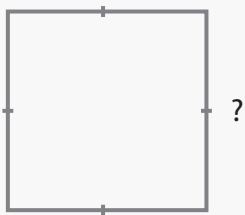
Perimeter: 28 cm
length ? : _____



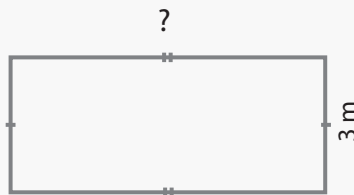
Perimeter: 48 cm
length ? : _____



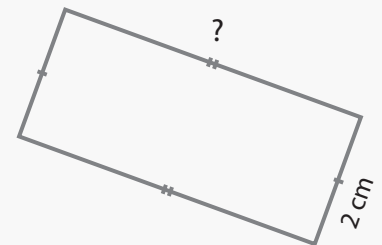
Perimeter: 42 cm
length ? : _____



Perimeter: 30 cm
length ? : _____




Perimeter: 20 cm
length ? : _____



Perimeter: 16 cm
length ? : _____

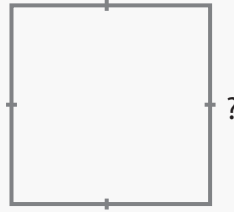
Answers

Find the length of the unknown sides given the perimeters of the following figures.



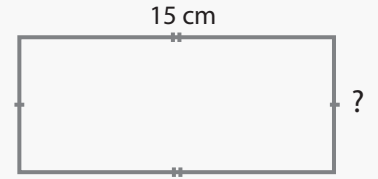
Perimeter: 20 cm

length ? : 5 cm



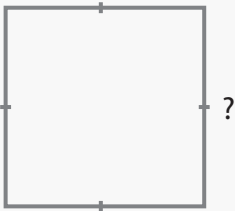
Perimeter: 32 cm

length ? : 8 cm



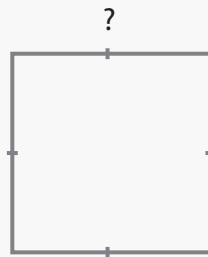
Perimeter: 40 cm

length ? : 5 cm



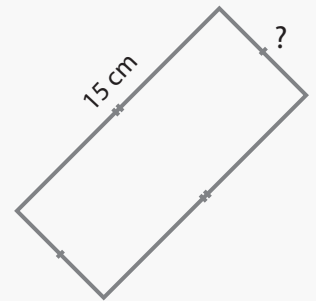
Perimeter: 28 cm

length ? : 7 cm



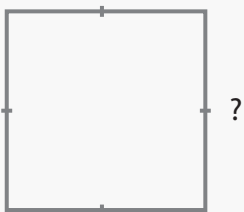
Perimeter: 48 cm

length ? : 12 cm




Perimeter: 42 cm

length ? : 6 cm



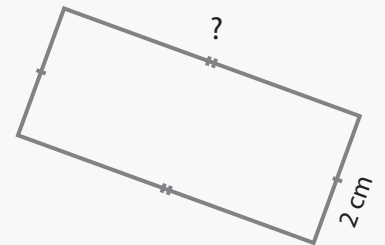
Perimeter: 30 cm

length ? : 7.5 cm



Perimeter: 20 cm

length ? : 7 cm



Perimeter: 16 cm

length ? : 6 cm