

Averages of Sets

Name: _____ Score: _____

Calculate the averages of the following sets of numbers.

25 15 12 56 23
20 32
40 32 25 19 13

Average =

90 30 50 10
80 70 30
40 60 50 40

Average =

12 32 24 18
10 30
43 20 11 40

Average =

20
60 40 50 30 70
80

Average =

13 24 38 15 21
10 11 20 30 16
22 27 14 32 37

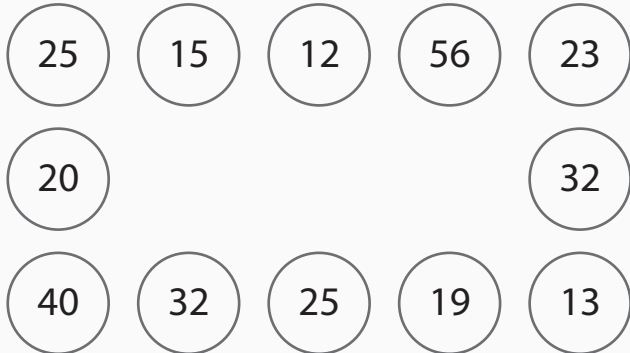
Average =

21 22 23 24 25
19 18 17 16 15

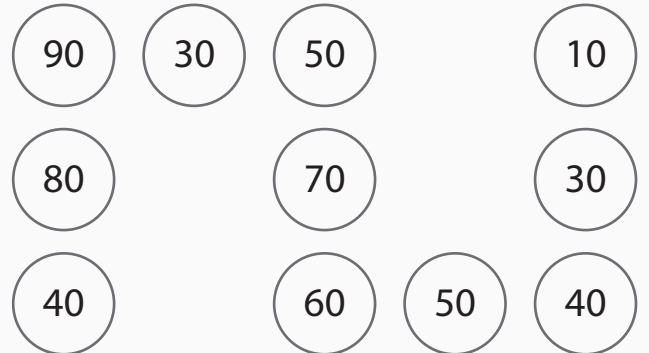
Average =

Answers

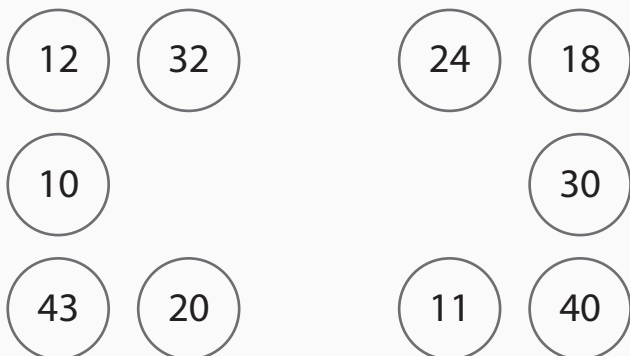
Calculate the averages of the following sets of numbers.



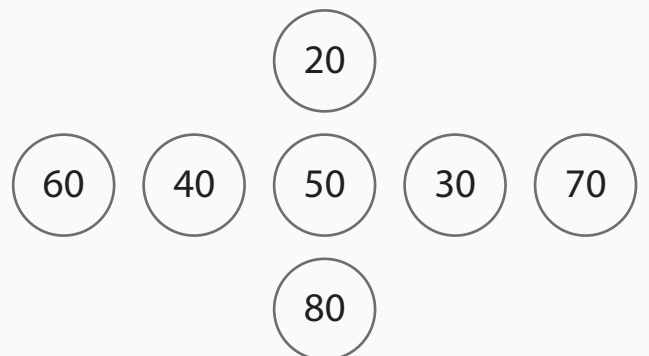
Average = **26**



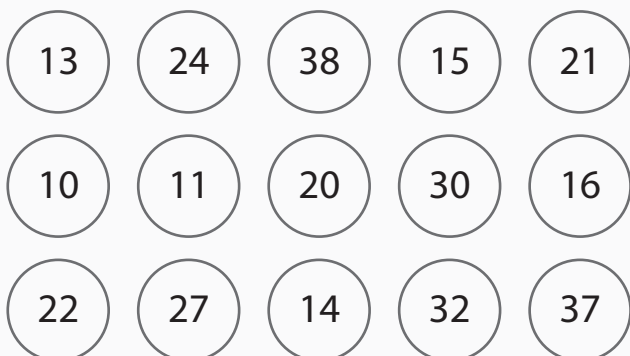
Average = **50**



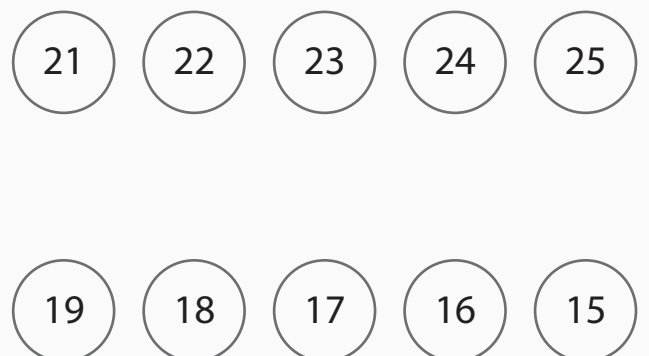
Average = **24**



Average = **50**



Average = **22**



Average = **20**