

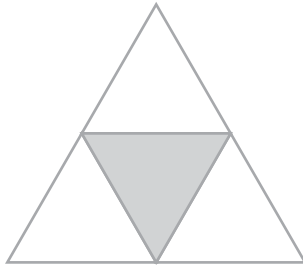
What Percentage is Shaded?

Name: _____ Score: _____

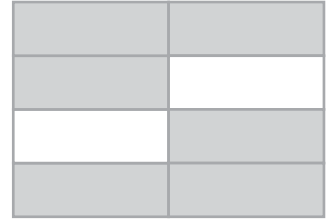
What Percentage of the following figures is shaded?



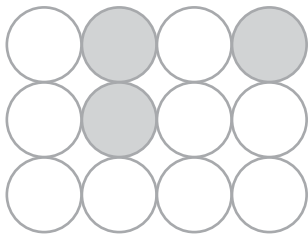
Shaded: _____



Shaded: _____



Shaded: _____



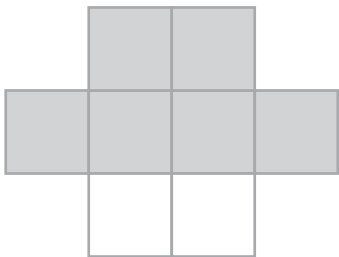
Shaded: _____



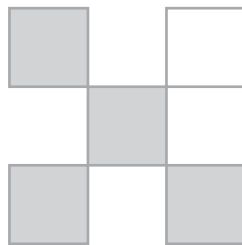
Shaded: _____



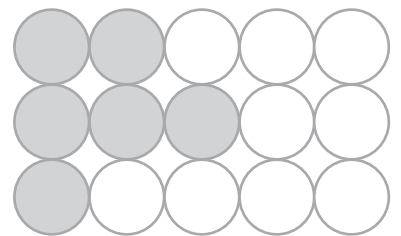
Shaded: _____




Shaded: _____



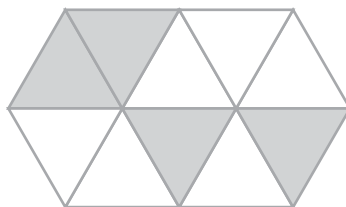
Shaded: _____



Shaded: _____



Shaded: _____




Shaded: _____



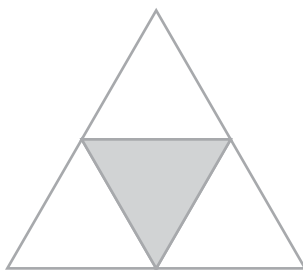
Shaded: _____

Answers

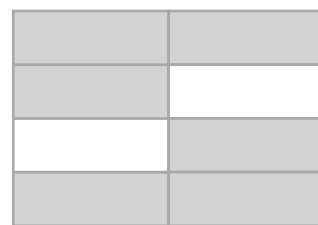
What Percentage of the following figures is shaded?



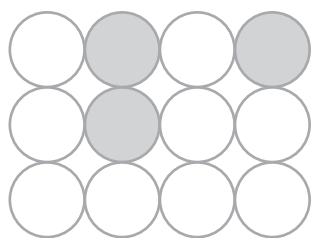
Shaded: 50%



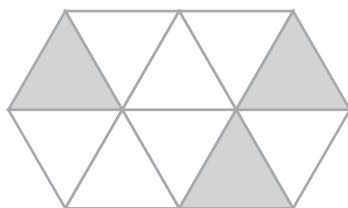
Shaded: 25%




Shaded: 75%



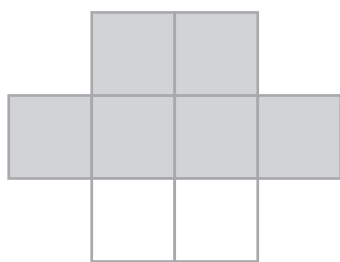
Shaded: 25%



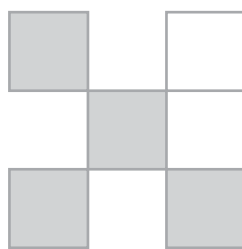
Shaded: 30%



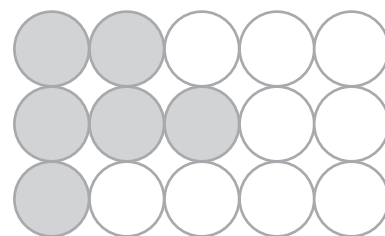
Shaded: 75%




Shaded: 75%



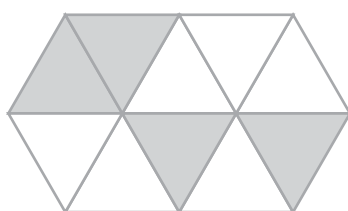
Shaded: 80%



Shaded: 40%



Shaded: 100%



Shaded: 40%



Shaded: 25%