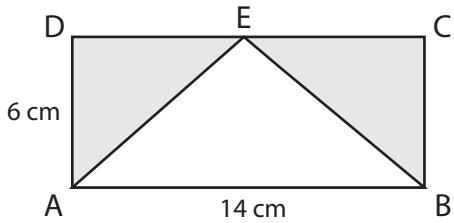


# Area of Triangles

Name: \_\_\_\_\_ Class: \_\_\_\_\_

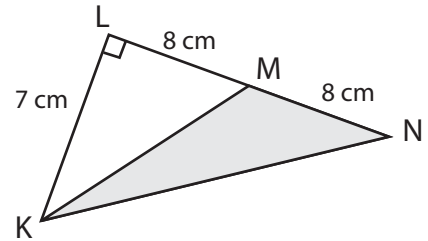
Find the area of the shaded parts.

ABCD is a rectangle.

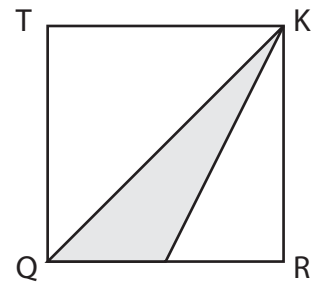


Shaded area: \_\_\_\_\_

KLN is a right-angles triangle.



Shaded area: \_\_\_\_\_



# Answers