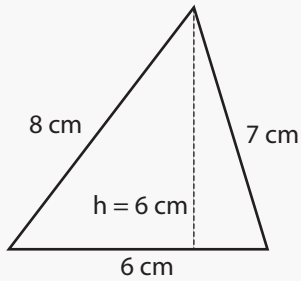


Perimeter and Area

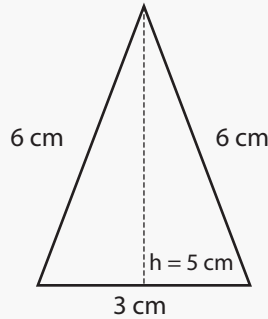
Name: _____ Class: _____

Find the area and perimeter of the following triangles (not drawn to scale).



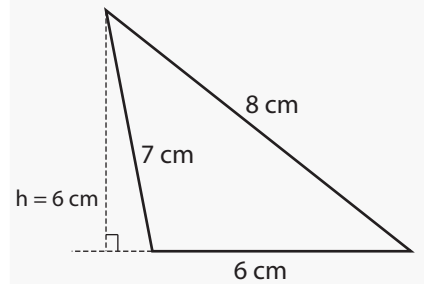
Perimeter: _____

Area: _____



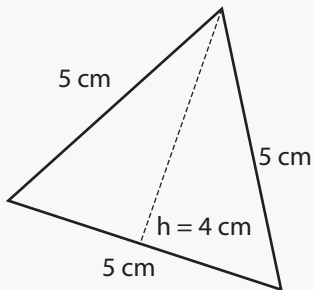
Perimeter: _____

Area: _____



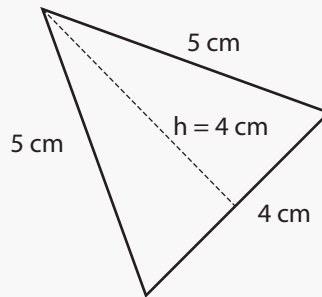
Perimeter: _____

Area: _____



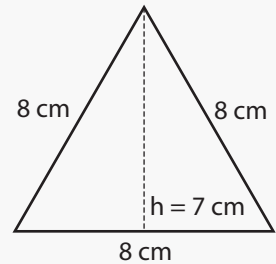
Perimeter: _____

Area: _____



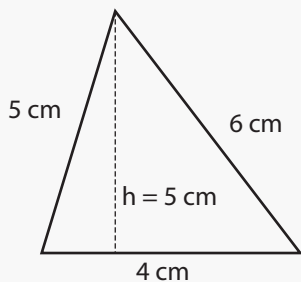
Perimeter: _____

Area: _____



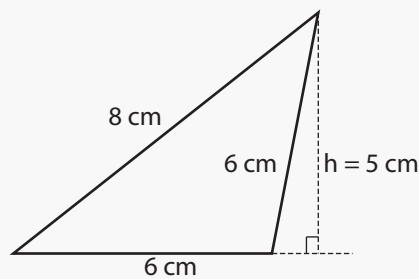
Perimeter: _____

Area: _____



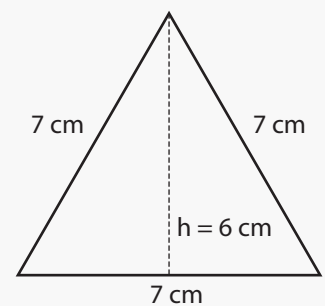
Perimeter: _____

Area: _____



Perimeter: _____

Area: _____

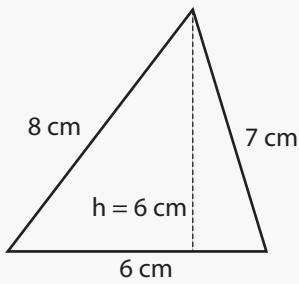


Perimeter: _____

Area: _____

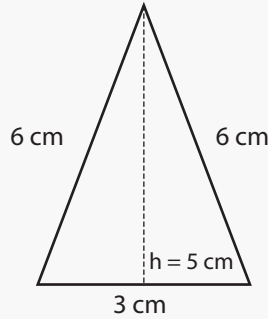
Answers

Find the area and perimeter of the following triangles (not drawn to scale).



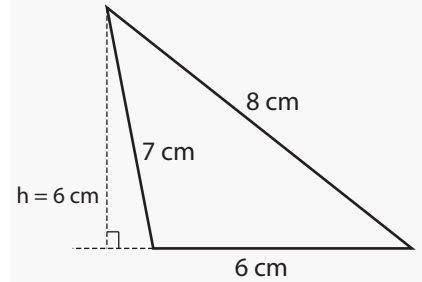
Perimeter: 21 cm

Area: 18 cm^2



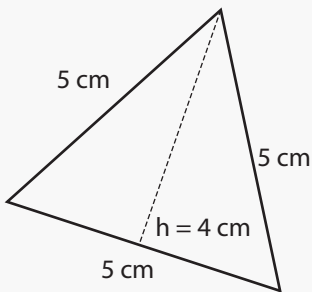
Perimeter: 15 cm

Area: 15 cm^2



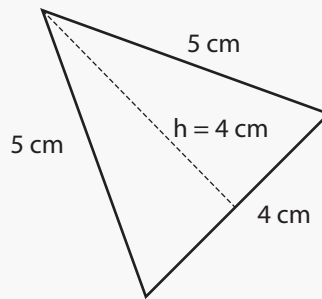
Perimeter: 21 cm

Area: 18 cm^2



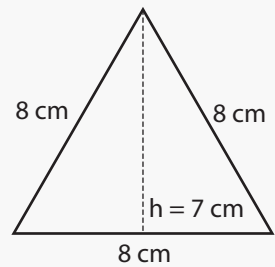
Perimeter: 15 cm

Area: 10 cm^2



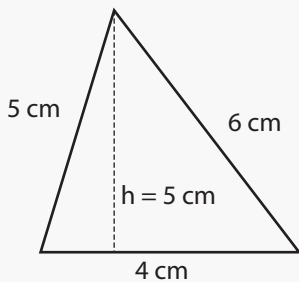
Perimeter: 14 cm

Area: 8 cm^2



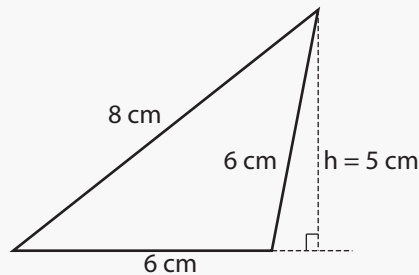
Perimeter: 24 cm

Area: 28 cm^2



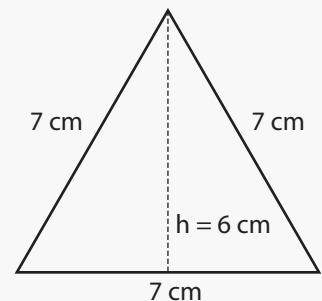
Perimeter: 15 cm

Area: 10 cm^2



Perimeter: 20 cm

Area: 15 cm^2



Perimeter: 21 cm

Area: 21 cm^2