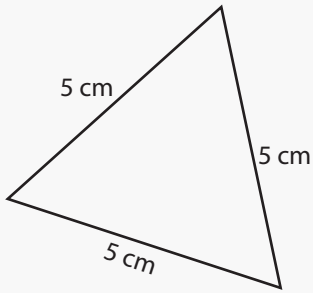


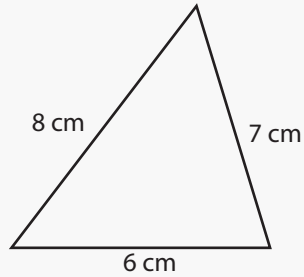
# Perimeter of Triangles

Name: \_\_\_\_\_ Class: \_\_\_\_\_

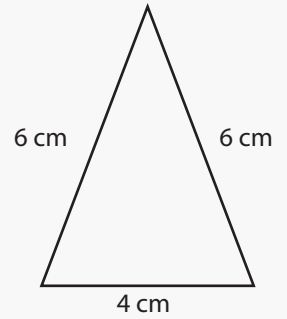
Find the perimeter of the following triangles (not drawn to scale).



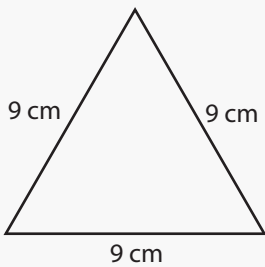
Perimeter: \_\_\_\_\_



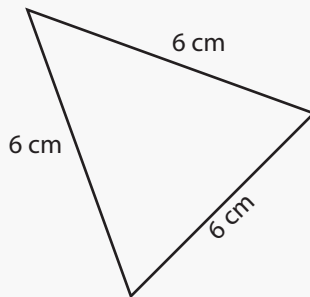
Perimeter: \_\_\_\_\_



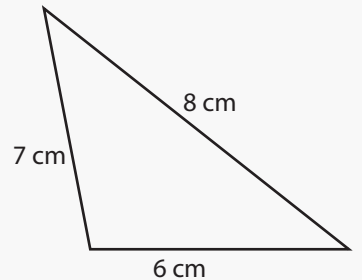
Perimeter: \_\_\_\_\_



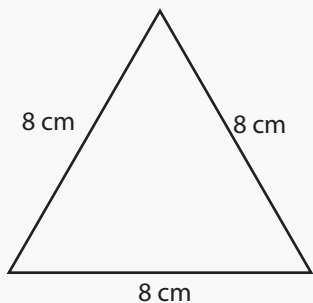
Perimeter: \_\_\_\_\_



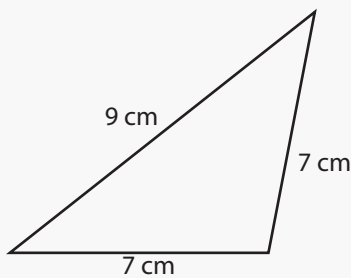
Perimeter: \_\_\_\_\_



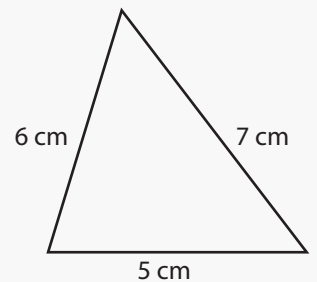
Perimeter: \_\_\_\_\_



Perimeter: \_\_\_\_\_



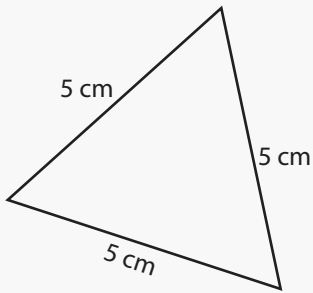
Perimeter: \_\_\_\_\_



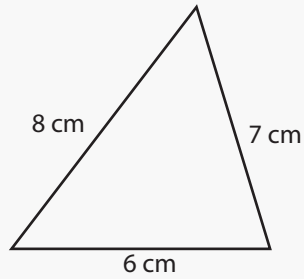
Perimeter: \_\_\_\_\_

# Answers

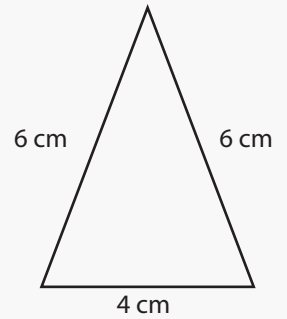
Find the perimeter of the following triangles (not drawn to scale).



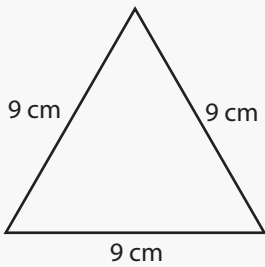
Perimeter: 15 cm



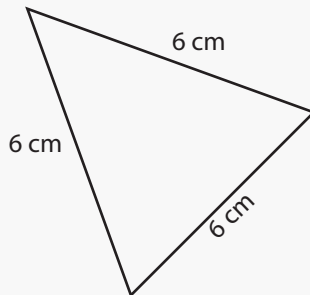
Perimeter: 21 cm



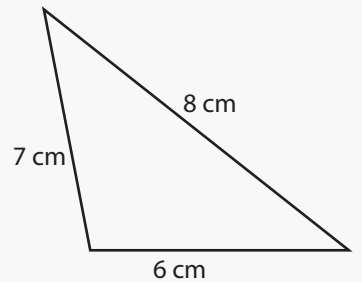
Perimeter: 16 cm



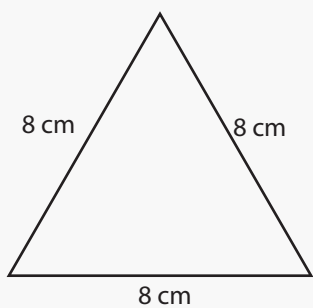
Perimeter: 27 cm



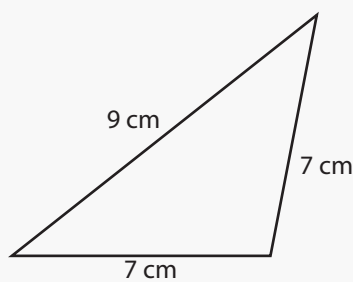
Perimeter: 18 cm



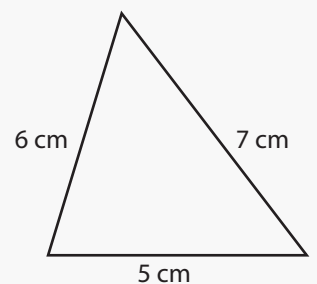
Perimeter: 21 cm



Perimeter: 24 cm



Perimeter: 23 cm



Perimeter: 18 cm