
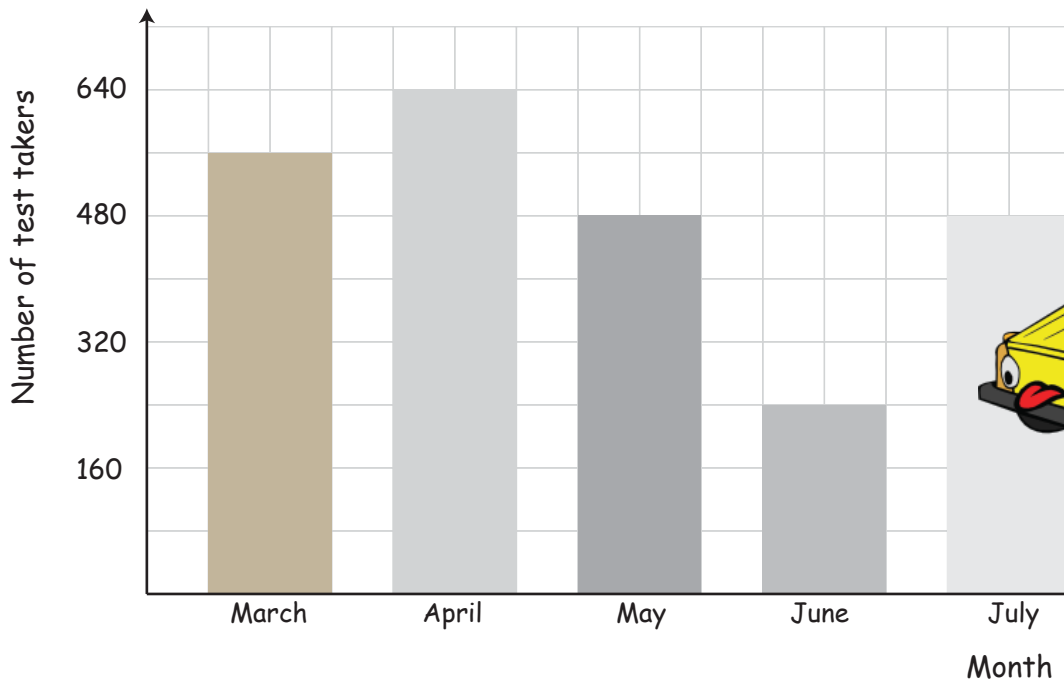


# Driving Test

Name: \_\_\_\_\_ Score: \_\_\_\_\_


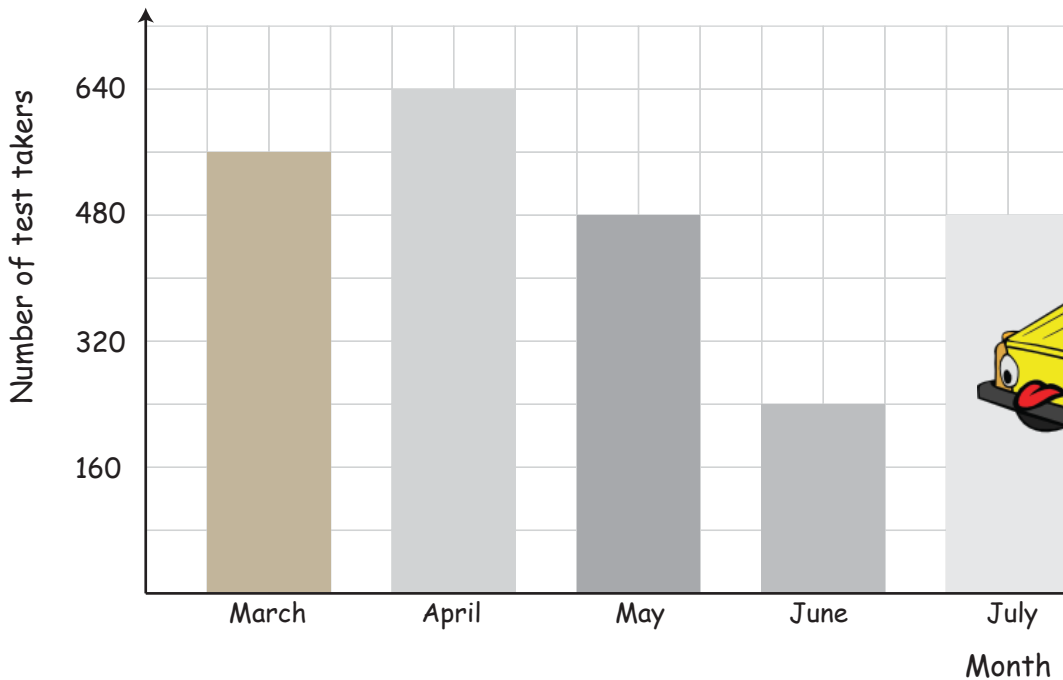
The following bar graph shows the number of people who took a driving test during a period of 5 months. Use the information to answer the questions.



- 1) How people took the driving test in May?
- 2) How many people took the test in these 5 months altogether?
- 3) What percentage of the total number of tests was taken in June?
- 4) What is the ratio of tests takers in April to that in July?
- 5) 29% of the driving test takers did not pass? How many people passed for their driving test during these 5 months?
- 6) The ratio men to women test takers was 5 : 3. How many women took a driving test in these 5 months?

# Answers

The following bar graph shows the number of people who took a driving test during a period of 5 months. Use the information to answer the questions.



1) How people took the driving test in May?

**480 people**

2) How many people took the test in these 5 months altogether?

**2,400 people**

3) What percentage of the total number of tests was taken in June?

**10%**

4) What is the ratio of tests takers in April to that in July?

**4 : 3**

5) 29% of the driving test takers did not pass? How many people passed for their driving test during these 5 months?

**1,704 people**

6) The ratio men to women test takers was 5 : 3. How many women took a driving test in these 5 months?

**900 women**