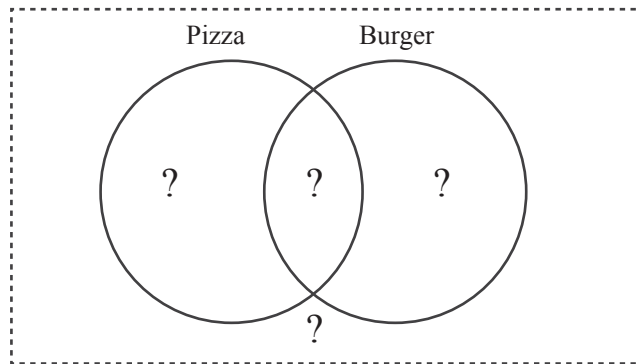


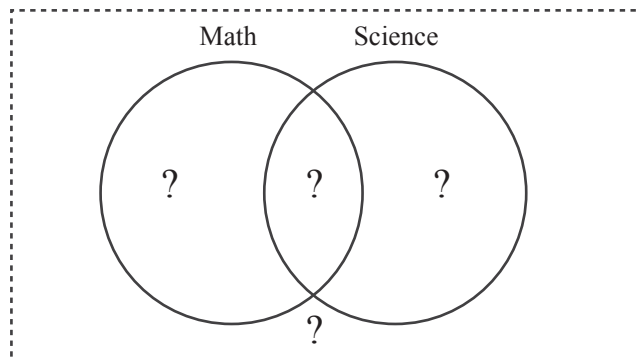
Complete Venn Diagrams

Name: _____ Score: _____

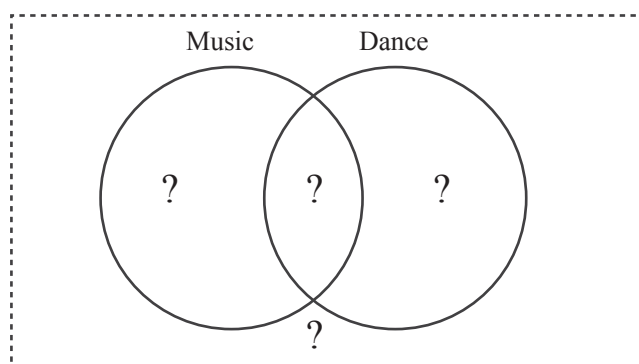
- 1) We asked a group of 50 people whether they like pizza and burgers. 10 people answered that they don't like pizza nor burgers at all. 20 people like both pizza and burgers and 12 people only liked pizza.



- 2) We asked 30 students whether they like Math or Science. 10 students like both math and science. 4 students said they only like Science. 6 students answered that they like Math but not Science.

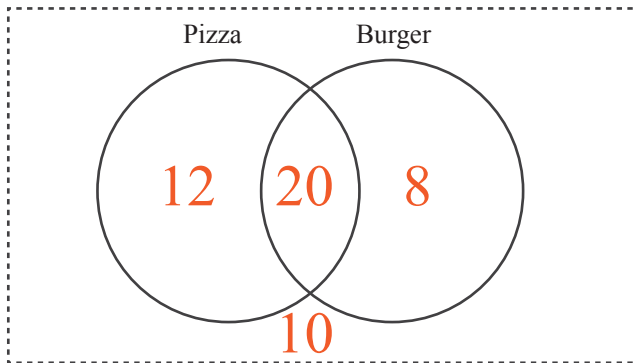


- 3) We asked 100 students whether they take music and dance classes. 20 students take both classes. 20 students answered that they don't take music nor dance. 30 students take music classes but not dance.

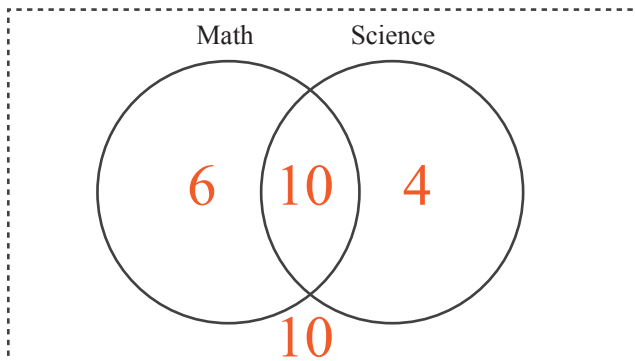


Answers

- 1) We asked a group of 50 people whether they like pizza and burgers. 10 people answered that they don't like pizza nor burgers at all. 20 people like both pizza and burgers and 12 people only liked pizza.



- 2) We asked 30 students whether they like Math or Science. 10 students like both math and science. 4 students said they only like Science. 6 students answered that they like Math but not Science.



- 3) We asked 100 students whether they take music and dance classes. 20 students take both classes. 20 students answered that they don't take music nor dance. 30 students take music classes but not dance.

