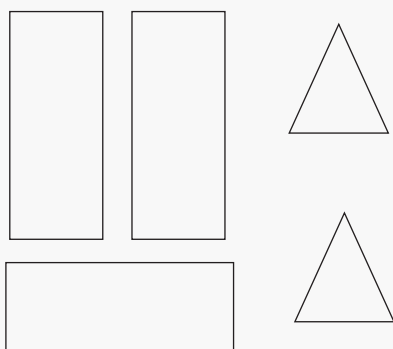
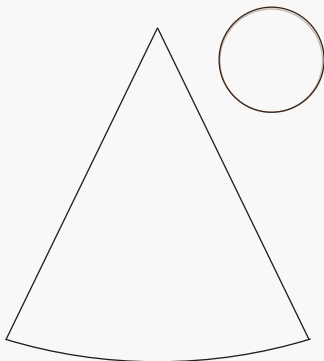

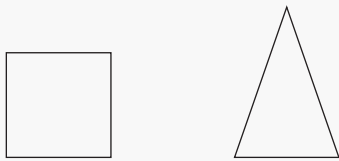
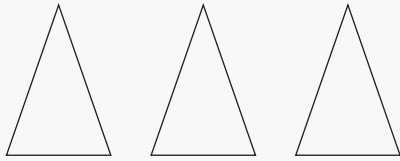


# Transform 2D into 3D

Name: \_\_\_\_\_ Class: \_\_\_\_\_

In each set use all the 2D net elements to draw its corresponding 3D shape.



# Answers

In each set use all the 2D net elements to draw its corresponding 3D shape.

