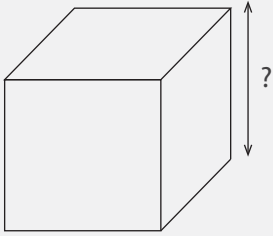


Unknown Length

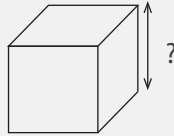
Name: _____ Class: _____

For each cube, calculate the length of its sides.



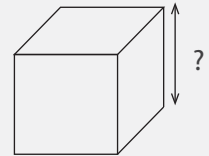
Volume: 512 cm^3

Length: _____



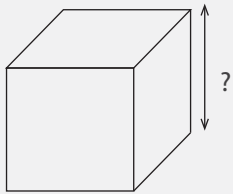
Volume: 8 cm^3

Length: _____



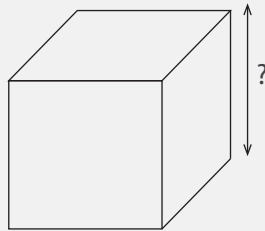
Volume: 27 cm^3

Length: _____



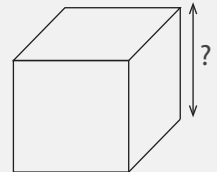
Volume: 125 cm^3

Length: _____



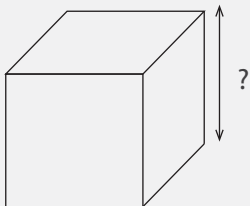
Volume: 343 cm^3

Length: _____



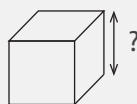
Volume: 64 cm^3

Length: _____



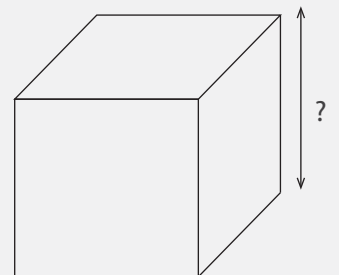
Volume: 216 cm^3

Length: _____



Volume: 1 cm^3

Length: _____

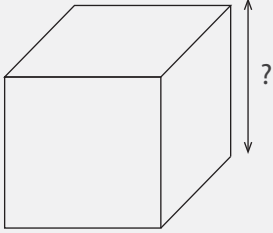


Volume: 729 cm^3

Length: _____

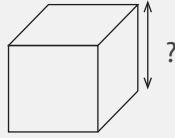
Answers

For each cube, calculate the length of its sides.



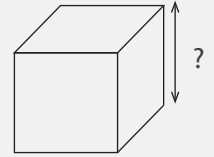
Volume: 512 cm^3

Length: 8 cm



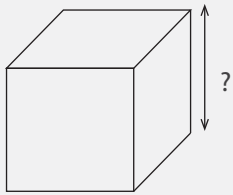
Volume: 8 cm^3

Length: 2 cm



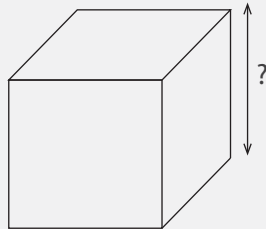
Volume: 27 cm^3

Length: 3 cm



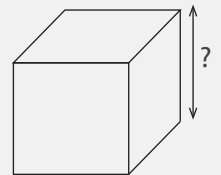
Volume: 125 cm^3

Length: 5 cm



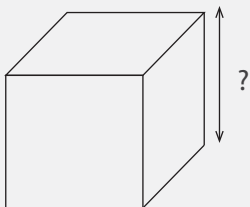
Volume: 343 cm^3

Length: 7 cm



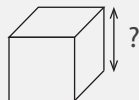
Volume: 64 cm^3

Length: 4 cm



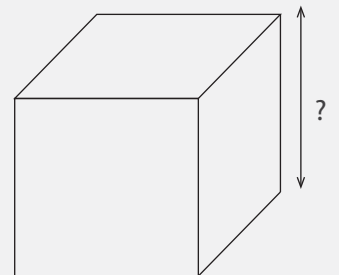
Volume: 216 cm^3

Length: 6 cm



Volume: 1 cm^3

Length: 1 cm



Volume: 729 cm^3

Length: 9 cm