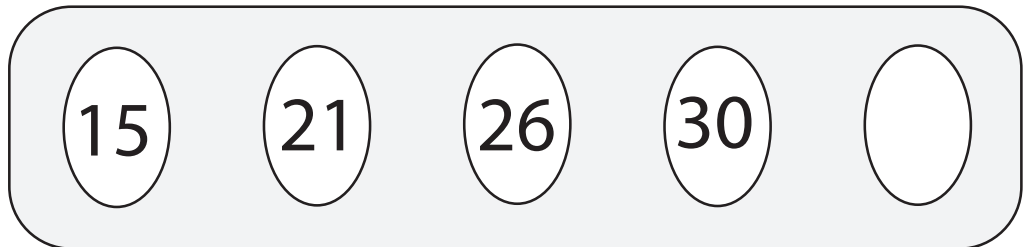
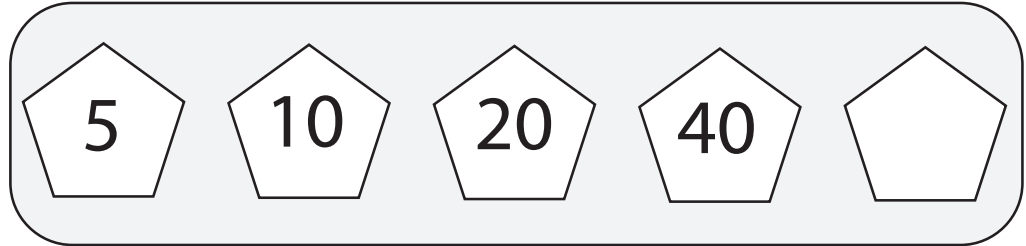




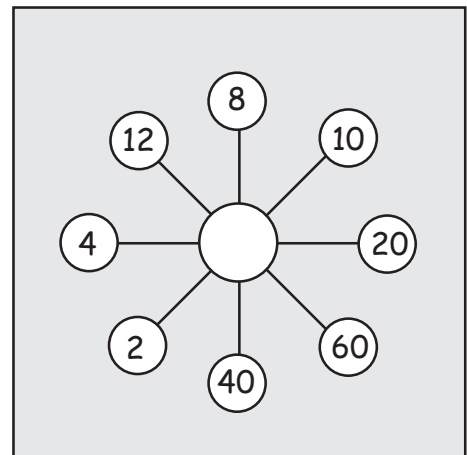
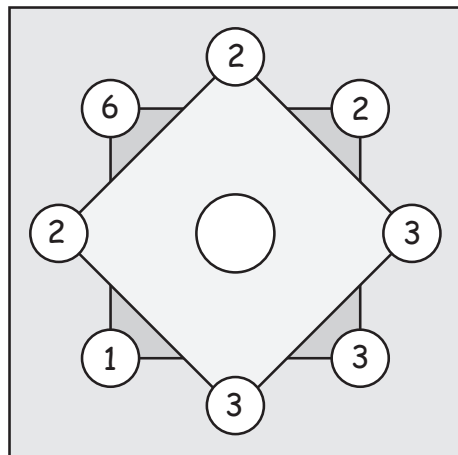
### Mixed patterns!

Each row follows a different rule. Fill in the blanks.



### Find the pattern!

The numbers in each square follow a pattern. Try to figure out which number comes in in the middle. For the first square, analyze the square and the diamond.





## Mixed patterns!

Each row follows a different rule. Fill in the blanks.

5      10      20      40      80

x2

81      27      9      3      1

divide by 3

15      21      26      30      33

+6 +5 +4 +3



## Find the pattern!

The numbers in each square follow a pattern. Try to figure out which number comes in in the middle. For the first square, analyze the square and the diamond.

The numbers in both shapes multiplied give 36

The number in the middle completes multiplication sentences!