
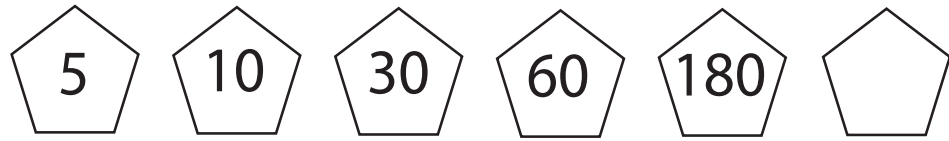




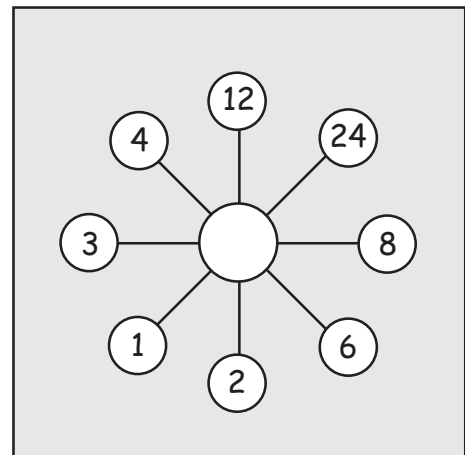
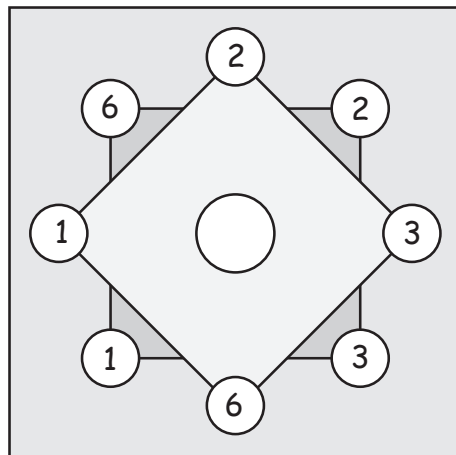
Mixed patterns!

Each row follows a different rule. Fill in the blanks.



Find the pattern!

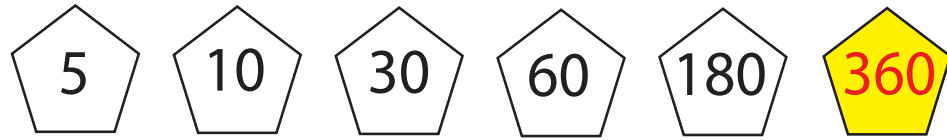
The numbers in each square follow a pattern. Try to figure out which number comes in in the middle. For the first square, analyze the square and the diamond.





Mixed patterns!


Each row follows a different rule. Fill in the blanks.



$\times 2 \times 3$



divide by 3 $\times 2$



$+ 7 + 9 + 11 + 13 + 15$



Find the pattern!

The numbers in each square follow a pattern. Try to figure out which number comes in in the middle. For the first square, analyze the square and the diamond.

