



Square Mania!

Fill in the blank so that all equations are correct.

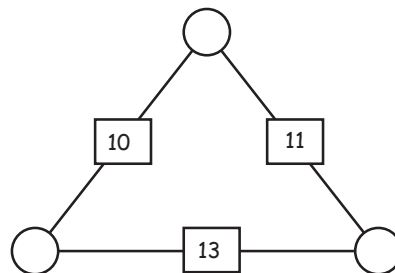
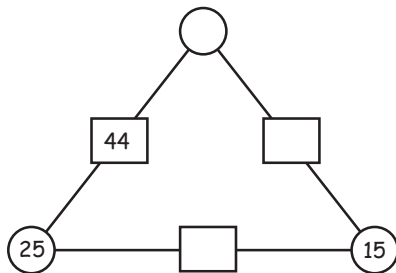
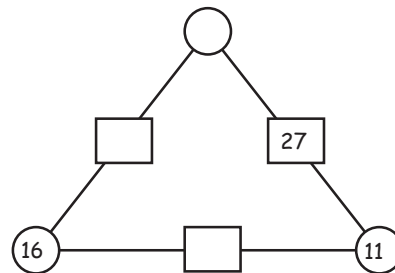
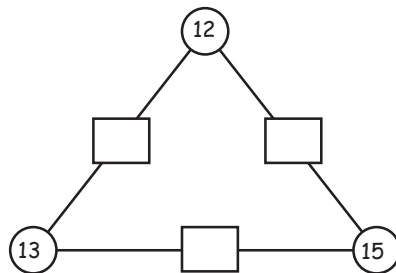
6	+		=	14
+		+		+
	+	9	=	16
=		=		=
13	+		=	

20	-	12	=	
+		+		+
25	-		=	13
=		=		=
	-		=	



Triangle magic!

For each triangle the 2 numbers in the circles add up to the number in the rectangle between them! Fill in the blanks.





Square Mania!

Fill in the blank so that all equations are correct.

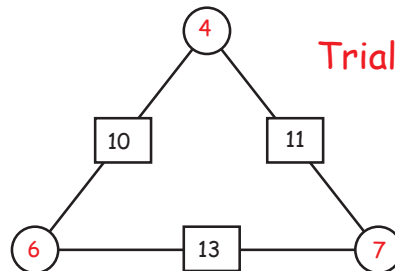
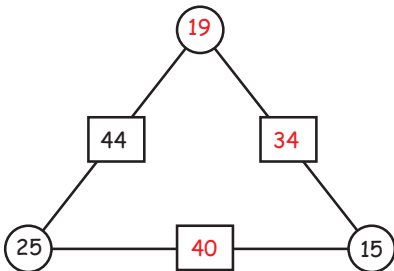
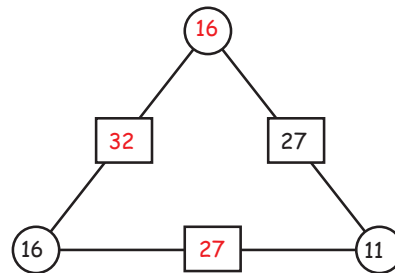
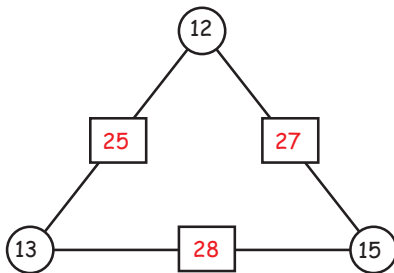
6	+	8	=	14
+		+		+
7	+	9	=	16
=		=		=
13	+	17	=	30

20	-	12	=	8
+		+		+
25	-	12	=	13
=		=		=
45	-	24	=	21



Triangle magic!

For each triangle the 2 numbers in the circles add up to the number in the rectangle between them! Fill in the blanks.



Trial and error!