



### Square Mania!

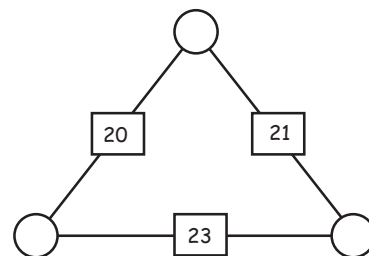
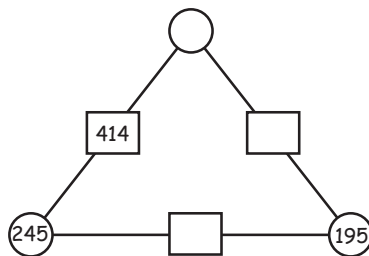
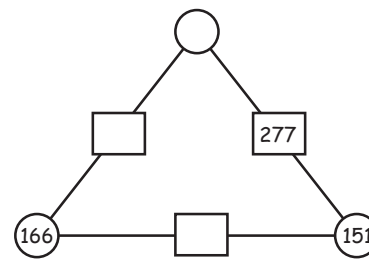
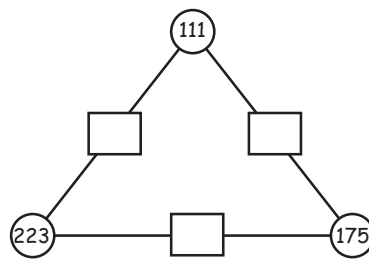
Fill in the missing numbers so that every row, column and diagonal add up correctly!

				58
12	22			58
			12	63
34	17		14	97
13			21	62
80	68	76	56	76



### Triangle magic!

For each triangle the 2 numbers in the circles add up to the number in the rectangle between them! Fill in the blanks.





## Square Mania!

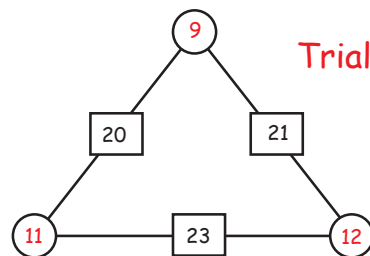
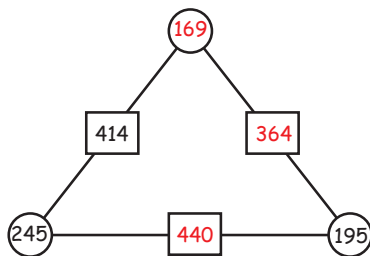
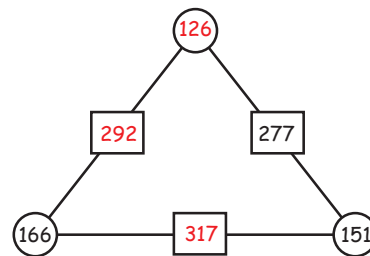
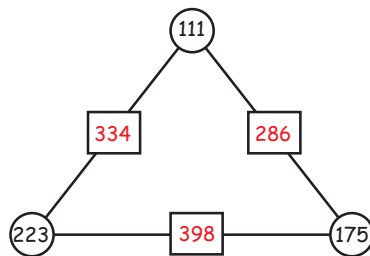
Fill in the missing numbers so that every row, column and diagonal add up correctly!

				58
12	22	15	9	58
21	11	19	12	63
34	17	32	14	97
13	18	10	21	62
80	68	76	56	76



## Triangle magic!

For each triangle the 2 numbers in the circles add up to the number in the rectangle between them! Fill in the blanks.



Trial and error!

