



### Square Mania!

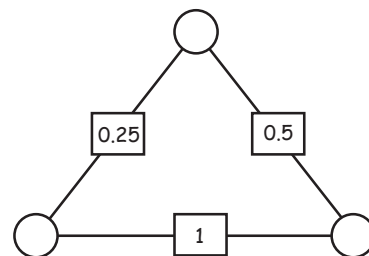
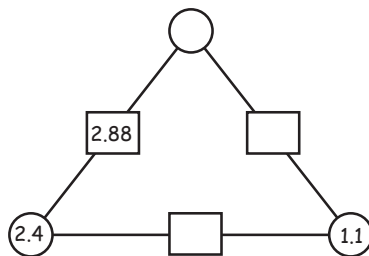
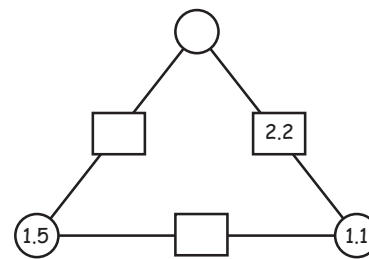
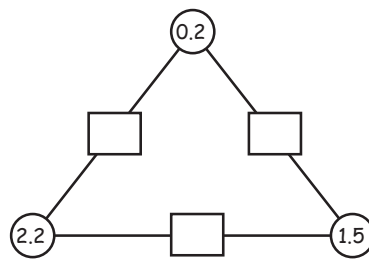
Fill in the numbers so that every row, column and diagonal add up correctly!

				42
3	16			47
			10	36
8	15		12	40
7			18	45
31	41	45	51	30



### Triangle magic!

For each triangle multiply the numbers in the circles and write the answer in the rectangle between them! Fill in the blanks.





## Square Mania!

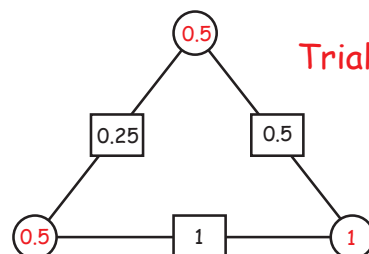
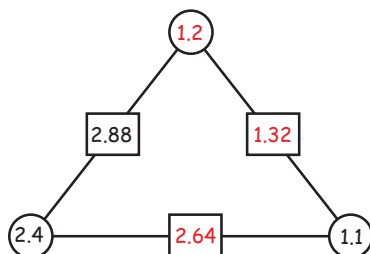
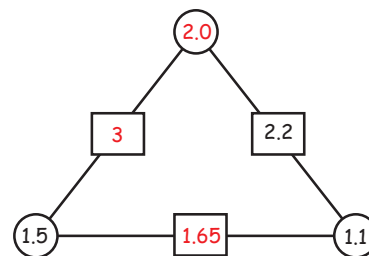
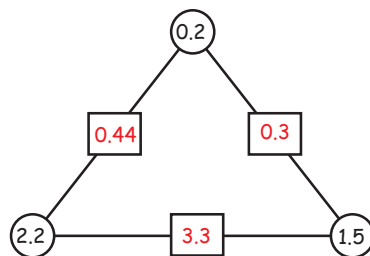
Fill in the numbers so that every row, column and diagonal add up correctly!

				42
3	16	17	11	47
13	4	9	10	36
8	15	5	12	40
7	6	14	18	45
31	41	45	51	30



## Triangle magic!

For each triangle multiply the numbers in the circles and write the answer in the rectangle between them! Fill in the blanks.



Trial and error!

