



Square Mania!

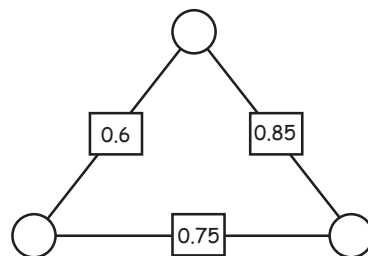
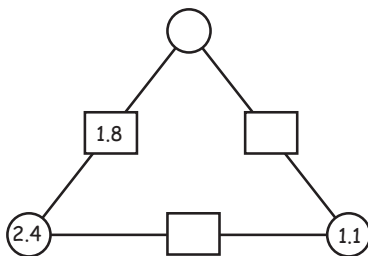
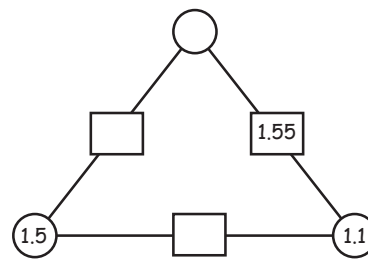
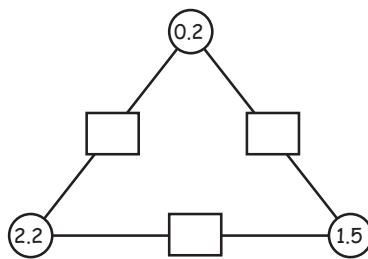
Fill in the numbers so that every row, column and diagonal add up correctly!

				34
1	14			39
			8	28
6			10	32
5			16	37
23	33	37	43	22



Triangle magic!

For each triangle the rectangle is the average of the 2 circles!
Fill in the blanks.





Square Mania!

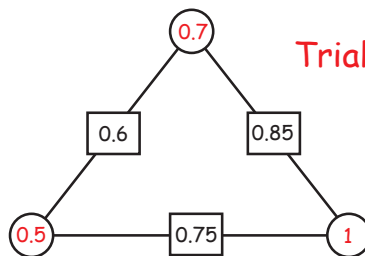
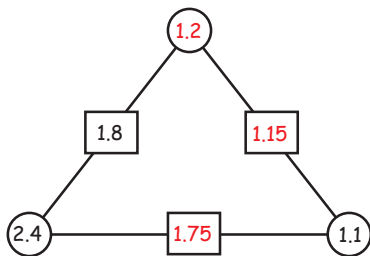
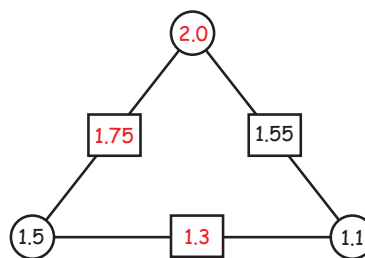
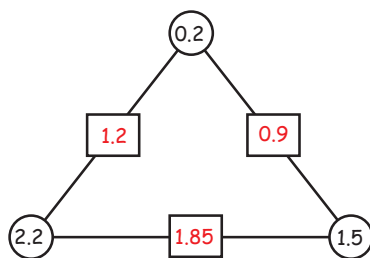
Fill in the numbers so that every row, column and diagonal add up correctly!

				34
1	14	15	9	39
11	2	7	8	28
6	13	3	10	32
5	4	12	16	37
23	33	37	43	22



Triangle magic!

For each triangle the rectangle is the average of the 2 circles!
Fill in the blanks.



Trial and error!

