



Find the pattern!



Find the pattern and apply it to each row?

2	4	8	16
3			81
4			
	25		



Odd one out!

Which number is the odd one out in each row?





Find the pattern!

Find the pattern and apply it to each row?

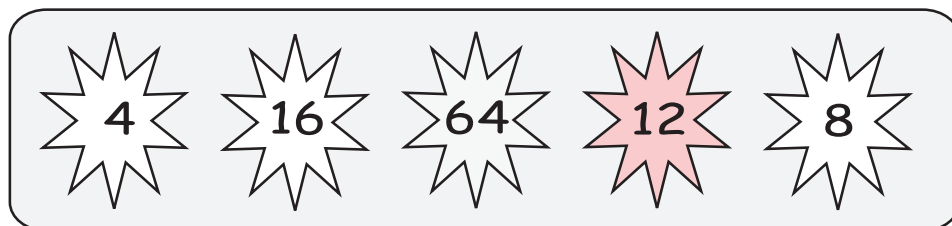
2	4	8	16
3	9	27	81
4	16	64	256
5	25	125	625

exponents




Odd one out!

Which number is the odd one out in each row?



Exponents of 2



Primes