



Path finder

For each block start at the bottom left and move up, down, or side ways until you reach finish. In both blocks, your path needs to add up to 23!

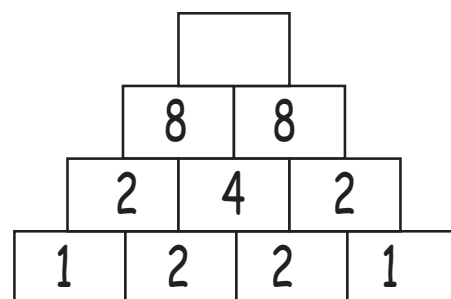
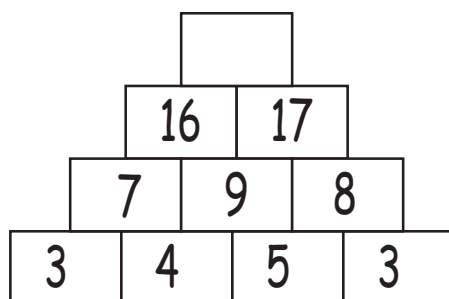
	2	3	2	1	7	9	1	Finish
	3	8	7	1	3	2	1	
	4	4	2	4	3	2	4	
	5	2	2	5		5	7	
Start	2	3	1	4	2	1	3	

	2	3	1	2	3	1	1	Finish
	3	1	9	1	5	4	9	
	1	5	3	3	2	1	4	
	4	6	2	4	4	3	3	
Start	2	9	1	5	2	2	1	



Number Pyramids!

What number comes on top of each pyramid?





Path finder

For each block start at the bottom left and move up, down, or side ways until you reach finish. In both blocks, your path needs to add up to 23!

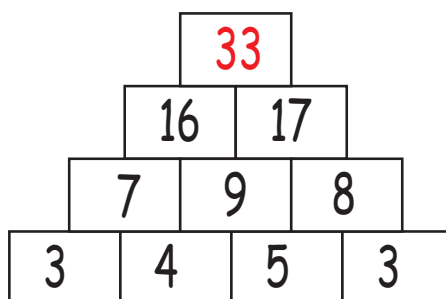
	2	3	2	1	7	9	1	Finish
	3	8	7	1	3	2	1	
	4	4	2	4	3	2	4	
	5	2	2	5		5	7	
Start	2	3	1	4	2	1	3	

	2	3	1	2	3	1	1	Finish
	3	1	9	1	5	4	9	
	1	5	3	3	2	1	4	
	4	6	2	4	4	3	3	
Start	2	9	1	5	2	2	1	

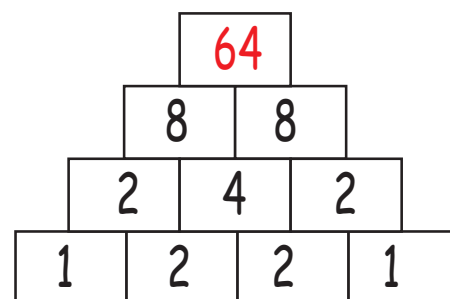


Number Pyramids!

What number comes on top of each pyramid?



Add the 2 numbers directly under a number!



Multiply the 2 numbers directly under a number!

