



Path finder

For each block start at the bottom left and move up, down, or side ways until you reach finish. In both blocks, your path needs to multiply to 192!

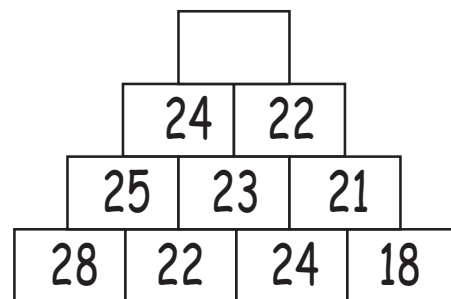
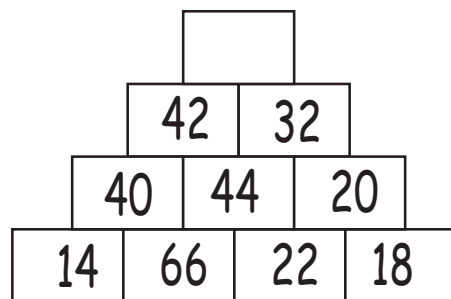
	2	3	8	1	2	2	1	Finish
	4	8	7	1	3	2	1	
	2	1	3	2	7	2	4	
	2	8	2	5	9	5	7	
Start	2	3	1	4	2	1	3	

	2	3	1	2	3	9	1	Finish
	3	2	9	1	5	8	2	
	3	5	3	8	8	1	1	
	4	8	1	8	7	3	3	
Start	2	2	2	1	2	2	1	



Number Pyramids!

What number comes on top of each pyramid?





Path finder

For each block start at the bottom left and move up, down, or side ways until you reach finish. In both blocks, your path needs to multiply to 192!

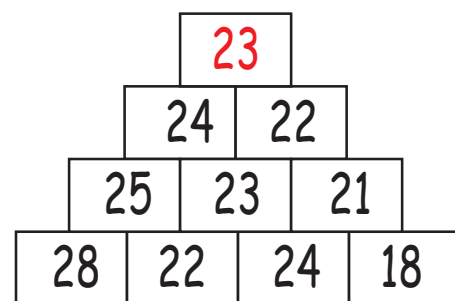
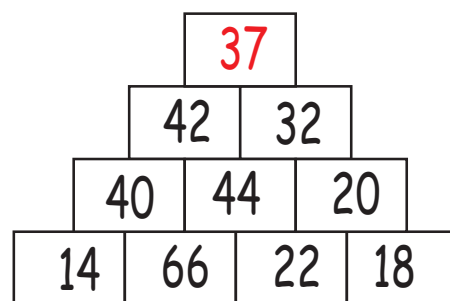
	2	3	8	1	2	2	1	Finish
	4	8	7	1	3	2	1	
	2	1	3	2	7	2	4	
	2	8	2	5	9	5	7	
Start	2	3	1	4	2	1	3	

	2	3	1	2	3	9	1	Finish
	3	2	9	1	5	8	2	
	3	5	3	8	8	1	1	
	4	8	1	8	7	3	3	
Start	2	2	2	1	2	2	1	



Number Pyramids!

What number comes on top of each pyramid?



Average the numbers!

