



Circle Patterns

Study the pattern in the first row of each circle and apply it to the other 2 rows in the circle.

17	98	81
33		48
55		25

43	25	18
91		47
64		29



What time is it?

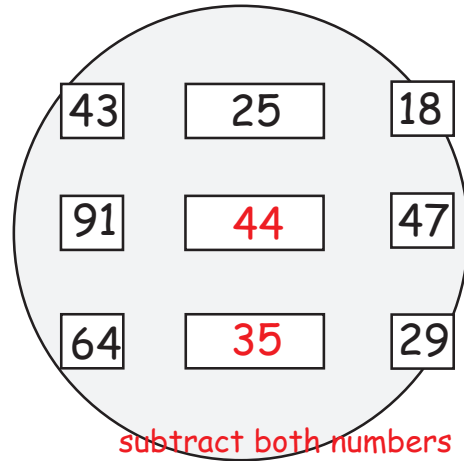
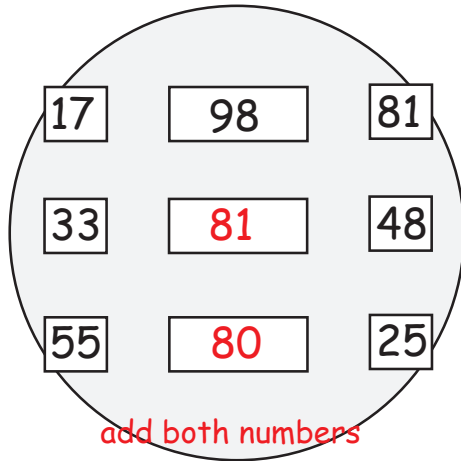
Find the time pattern and fill in the missing time for each row of clocks.







Circle Patterns

Study the pattern in the first row of each circle and apply it to the other 2 rows in the circle.



What time is it?


Find the time pattern and fill in the missing time for each row of clocks.



add 15 minutes



add 20 minutes



add 30 minutes