



Circle Patterns

Study the pattern in the first row of each circle and apply it to the other 2 rows in the circle.

35	7,253	27
17		26
35		48

2	120	4
4		6
7		5



What time is it?

Find the time pattern and fill in the missing time for each row of clocks.

 05:15	 16:48	 07:
 08:20	 15:03	 21:
 05:15	 :25	 07:35



Circle Patterns

Study the pattern in the first row of each circle and apply it to the other 2 rows in the circle.

35	7,253	27
17	6,271	26
35	8,453	48

Follow the same the order and use all digits



2	120	4
4	360	6
7	525	5

multiply both numbers and then times 15




What time is it?


Find the time pattern and fill in the missing time for each row of clocks.



Divide the minutes by 3



add 6 hours and 43 minutes



The clock in the middle displays the average time of the 2 other clocks