







Rows of blocks!

Study the pattern of the first 2 rows of blocks and apply it to fill in the missing numbers of the other rows.

| | | | | | | |
|----|---|----|----|----|---|----|
| |  | 12 | 35 | 23 |  | |
| | | 11 | 22 | 66 | 22 | 11 |
| 25 | 10 | 5 | | 10 | 20 | 10 |
| | 20 | 15 | | 15 | 20 | |
| |  | 19 | | 19 |  | |







Find the pattern!

Study the first 2 stars in each oval and then complete the 3rd star.



Rows of blocks!

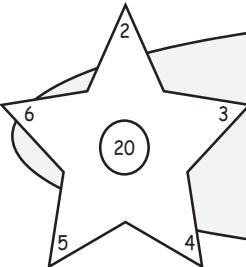
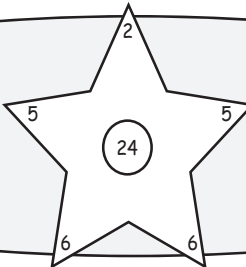

Study the pattern of the first 2 rows of blocks and apply it to fill in the missing numbers of the other rows.


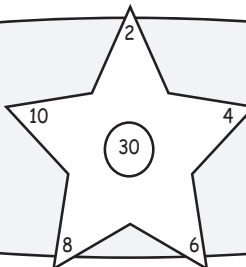
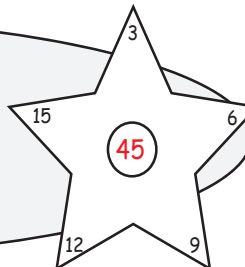
| | | | | | | |
|---|----|----|----|---|----|----|
|  | 12 | 35 | 23 |  | | |
| 11 | 22 | 66 | 22 | 11 | | |
| 25 | 10 | 5 | 80 | 10 | 20 | 10 |
| 20 | 15 | 70 | 15 | 20 | | |
|  | 19 | 38 | 19 |  | | |



Find the pattern!

Study the first 2 stars in each oval and then complete the 3rd star.

| | | |
|---|--|---|
|  |  |  |
|---|--|---|

| | | |
|---|--|---|
|  |  |  |
|---|--|---|