







Rows of blocks!

Study the pattern of the first 2 rows of blocks and apply it to fill in the missing numbers in the centers.

		5	9	13		
		8	6	5	4	2
4	3	4		5	8	10
		8	2		5	9
		9		11		



Find the pattern!


Study the first 2 stars in each oval and then complete the 3rd star.



Rows of blocks!

Study the pattern of the first 2 rows of blocks and apply it to fill in the missing numbers in the centers.

Average out the numbers
left and right of the center



Find the pattern!

Study the first 2 stars in each oval and then complete the 3rd star.

