







### Rows of blocks!

Study the pattern of the first 2 rows of blocks and apply it to fill in the missing numbers in the centers.

		5	3	3		
	8	6	2	4	2	
4	1	6		5	8	10
	8	2		5	9	
		9		11		



### Find the pattern!

Study the first 2 stars in each oval and then complete the 3rd star.



## Rows of blocks!

Study the pattern of the first 2 rows of blocks and apply it to fill in the missing numbers in the centers.

The number in the center is the same as the lowest number in each row

		5	3	3			
		8	6	2	4	2	
4		1	6	1	5	8	10
		8	2	2	5	9	
		9	9	11			



## Find the pattern!

Study the first 2 stars in each oval and then complete the 3rd star.

Multiply all numbers!

--	--	--

Add up, times 9!

--	--	--

