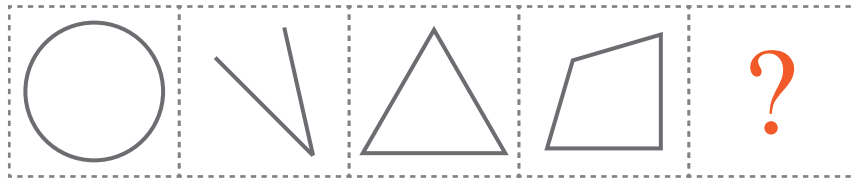





puzzle 1

What is the next shape in the pattern ?

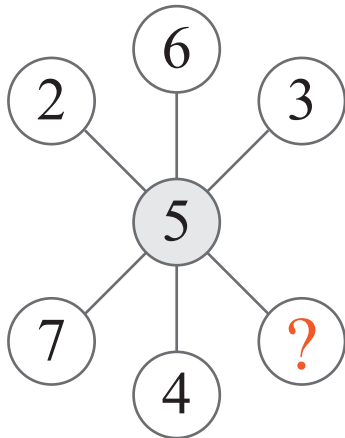


www.mathinenglish.com

- (A) 
- (B) 
- (C) 

puzzle 2

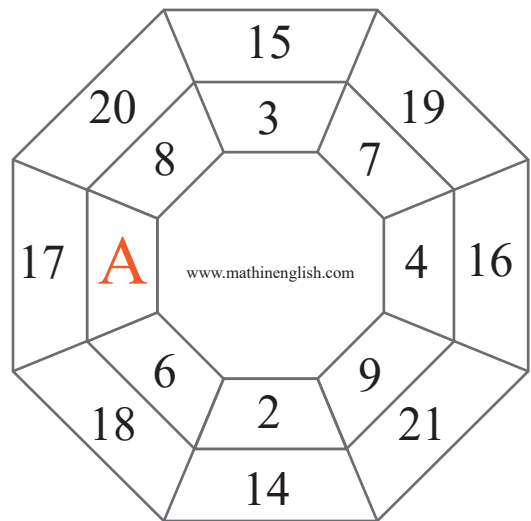
What is the missing number in this puzzle ?



www.mathinenglish.com

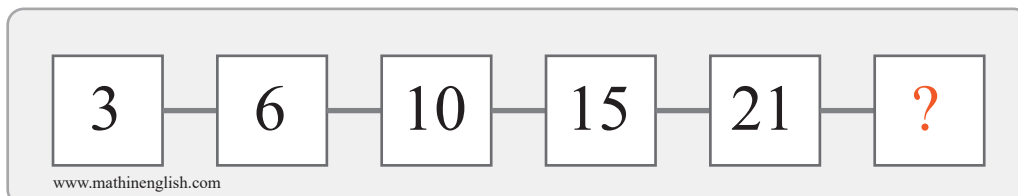
puzzle 3

Which 1-digit number replaces A in this puzzle ?



puzzle 4

Which number comes next in this sequence ?



www.mathinenglish.com

## Answer to brain teasers

**puzzle 1 :** C

The number of lines of each shape follows a +1 pattern.

**puzzle 2 :** 8

The average of 8 and 2 is equal to the middle number 5.

**puzzle 3 :** 5

The difference between the numbers in the inner and outer ring is 12. This means that A must be 5.

**puzzle 4 :** 28

The sequence follows a + 3, + 4, + 5, + 6 and + 7 pattern.