


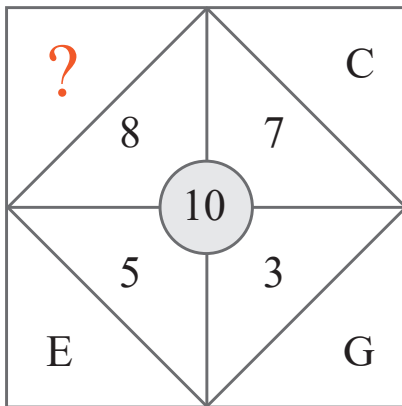
puzzle 1

What number completes the sequence ?




puzzle 2

What is the missing letter ?



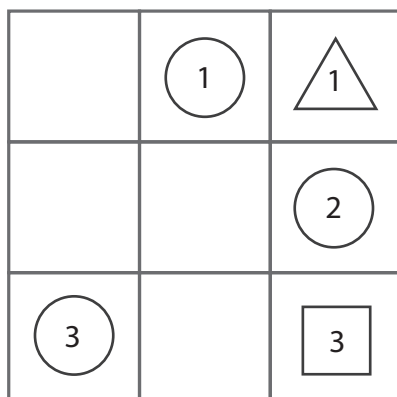
puzzle 3

What is the number needed to complete this pattern ?



puzzle 4

Which 4 shapes and number combinations are needed to complete the shape box ?



- (A) 1, 3, 2, 2
- (B) 1, 3, 1, 2
- (C) 2, 2, 3, 1

Answer to brain teasers

puzzle 1 : 13
-3, -4, -5 and so on.

puzzle 2 : B
B plus 8 makes 10.

puzzle 3 : 8
The first 2 cells in a row divided by 2 form the value of the 3rd cell.

puzzle 4 : C
Each row contains a circle, square and triangle, with a 1 for row 1, a 2 for row 2, etc.