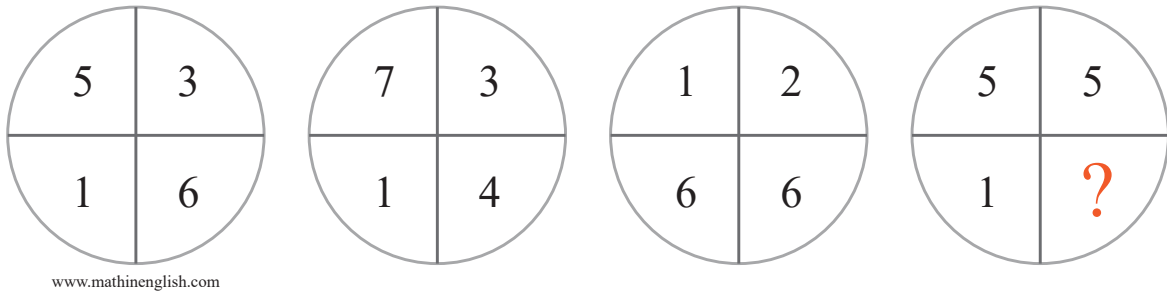


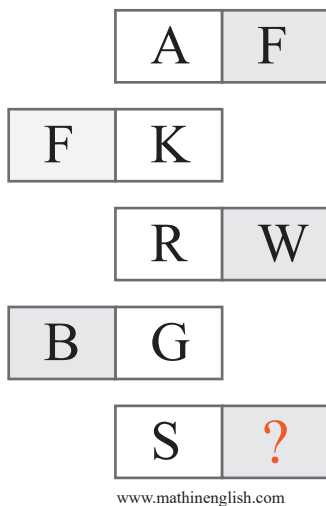
puzzle 1

Which number completes the number pattern ?



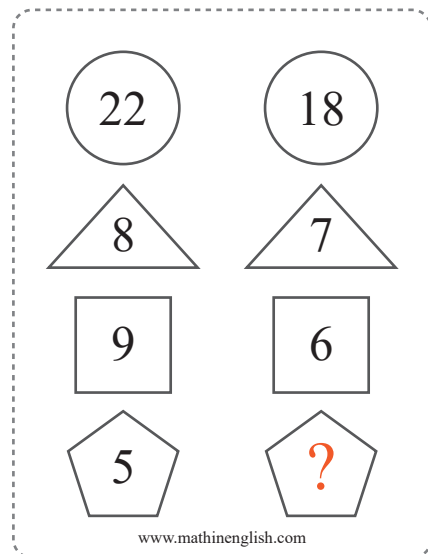
puzzle 2

Which letter completes this puzzle ?



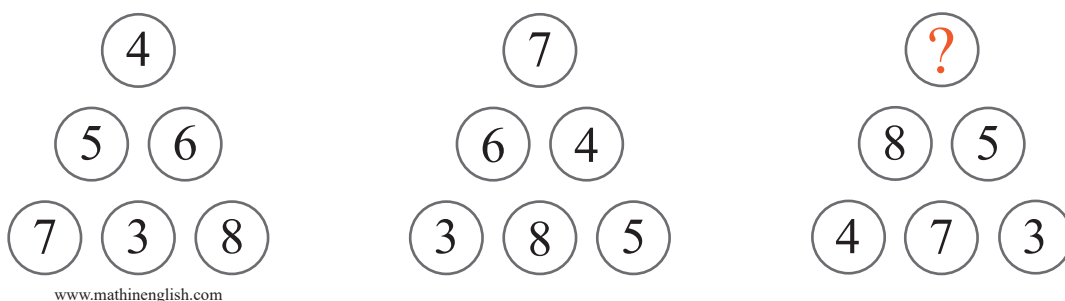
puzzle 3

What is the missing number in this brainteaser ?



puzzle 4

Which missing number completes the pattern ?



Answer to brain teasers

puzzle 1 : 4

The 4 numbers in each circle add up to 15.

puzzle 2 : X

Add 5 letters to S.

puzzle 3 : S

The 3 other shapes add up to the value of the circle.

puzzle 4 : 6

All numbers in a triangle form the number range 3 to 8.