
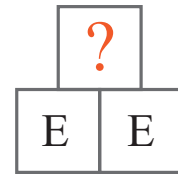
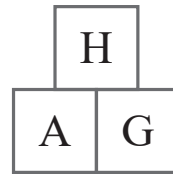
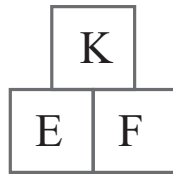


puzzle 1

Which letter needs to be added to complete the pattern ?

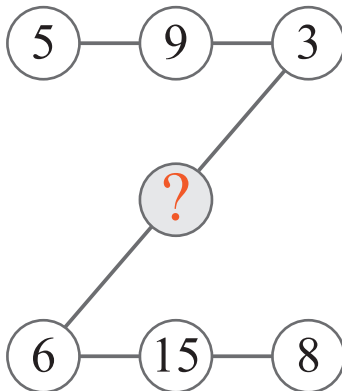


www.mathinenglish.com



puzzle 2


Which number completes the z-pattern ?



www.mathinenglish.com

puzzle 3

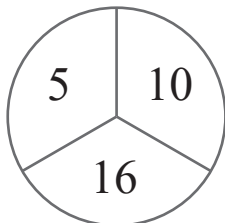
What is the missing number ?



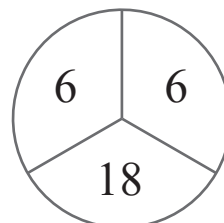

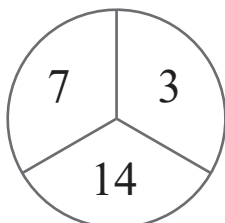
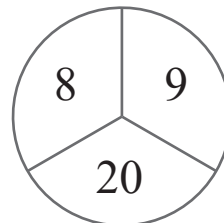
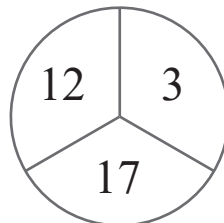
www.mathinenglish.com

puzzle 4

Which number needs to be added to complete the sequence ?



www.mathinenglish.com



Answer to brain teasers

puzzle 1 : J

E is 5 and E plus E makes 10, which is the letter value of J.

puzzle 2 : 10

Take the sum of 6 and 3 and add a 1.

puzzle 3 : 2

Add the digits in the top row to those in the 2nd row to get the 3rd row.

puzzle 4 : 9

Add the 2 smaller top numbers in each circle and add respectively a 1, 2, 3, 4, 5 and 6.