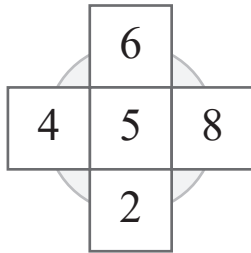
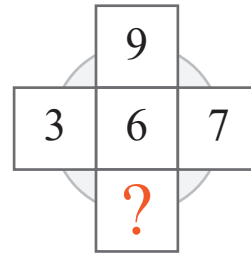
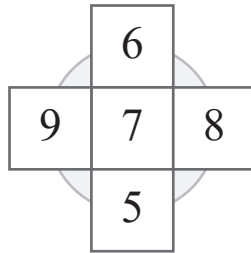


puzzle 1

Which number is needed to complete this puzzle ?

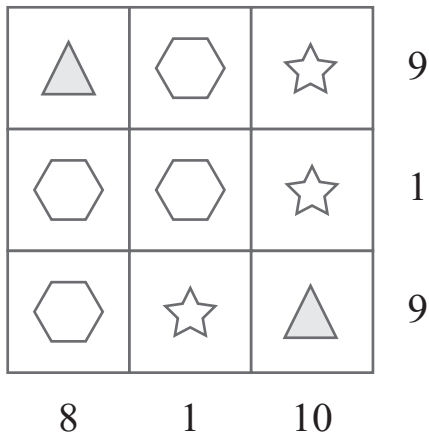


www.mathinenglish.com




puzzle 2

What is the value of the triangle (whole number) ?



puzzle 3

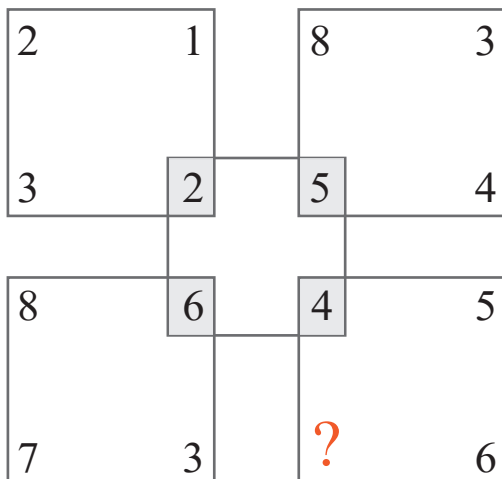
What is the missing letter in this number-letter puzzle ?



www.mathinenglish.com

puzzle 4

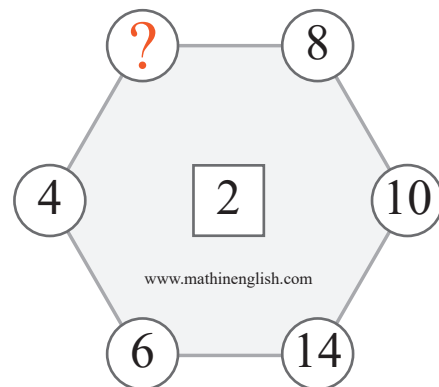
What is the missing number ?



www.mathinenglish.com

puzzle 5

What is the missing number in this pattern ?



www.mathinenglish.com

Answer to brain teasers

puzzle 1 : 5

With a 5 the average of the 4 numbers in the cross is 6.

puzzle 2 : 8

Looking at the 2nd column, the star is either a 0 or a 1.

puzzle 3 : L

Add 7, 2 and 3 to get 12, which stands for number letter L.

puzzle 4 : 1

The sum of the 3 corner numbers in each square needs to be divided by 3 to get the middle number.

puzzle 5 : 12

12 as a multiple of 2 is missing.