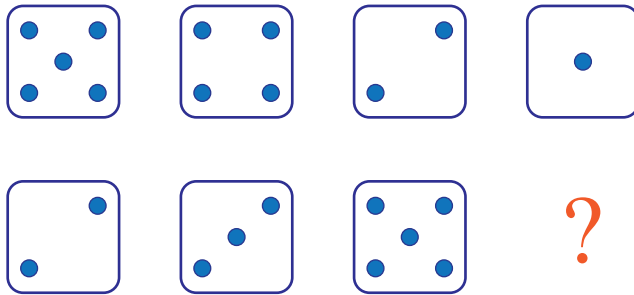
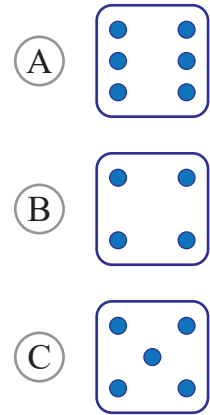


puzzle 1

What is the next dice in the pattern ?




www.mathinenglish.com



puzzle 2

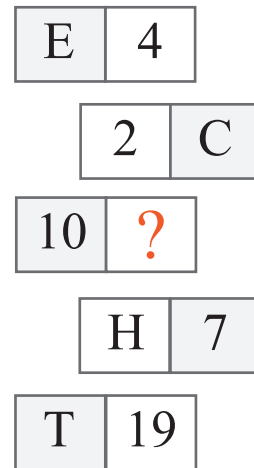
Which number completes this math puzzle ?



www.mathinenglish.com

puzzle 3

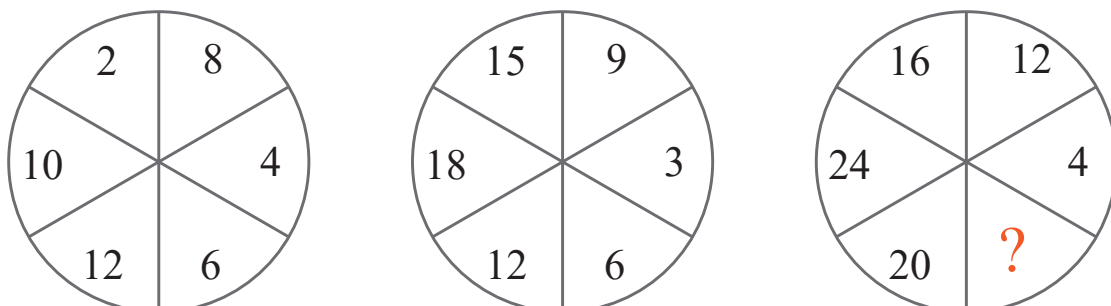
Which letter is missing in this pattern ?



www.mathinenglish.com

puzzle 4

Which number replaces the question mark?



www.mathinenglish.com

## Answer to brain teasers

**puzzle 1 :** A

Each top-down dice pair adds up to 7.

**puzzle 2 :** 73

The left and right numbers form the 2 digits of 73.

**puzzle 3 :** K

Add a 1 to the numbers to get the letter value in the rows.

**puzzle 4 :** 8

8 is a multiple of 4. The circles follow the multiples of 2, 3 and 4