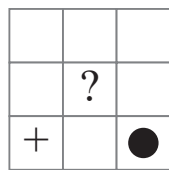
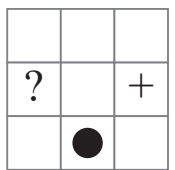
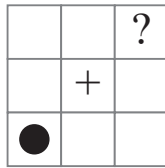
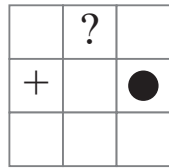

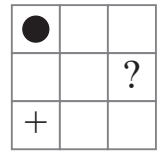


puzzle 1

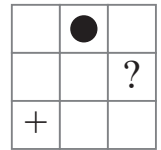
Which option completes this pattern ?



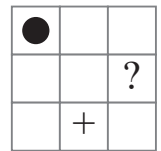
(A)



(B)

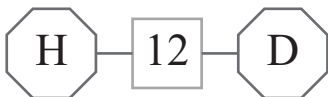
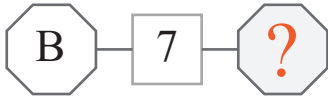
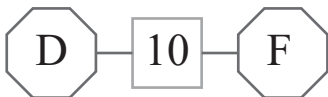


(C)




puzzle 2

Which letter completes this puzzle ?



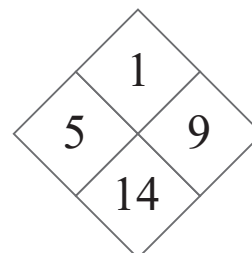
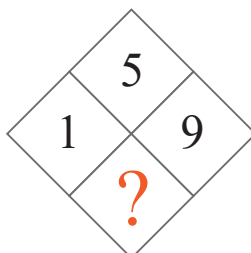
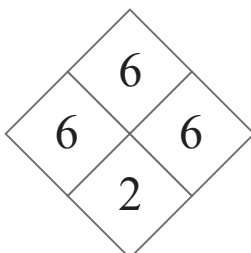
puzzle 3

Which number should replace the question mark ?



puzzle 4

Which number completes this number sequence ?



## Answer to brain teasers

**puzzle 1 :** C

The symbols moves 1 cell to the right in the next square.

**puzzle 2 :** E

B and E add up to 7.

**puzzle 3 :** 2

The cells of each side of the triangle add up to 20.

**puzzle 4 :** 2

The sum of the horizontal cells in each diamond is equal to the product of the top and bottom numbers.