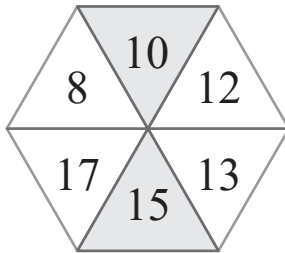
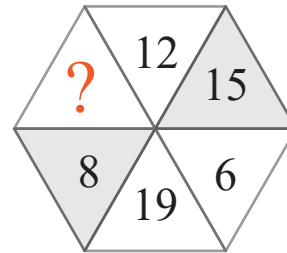
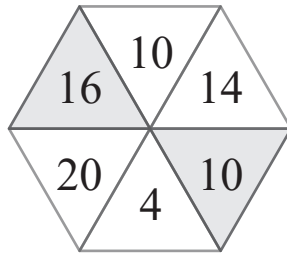


puzzle 1

Which number completes this pattern ?

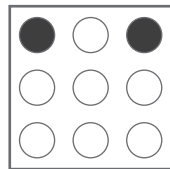

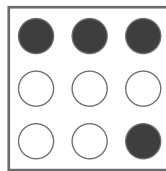
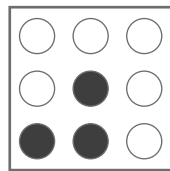



www.mathinenglish.com



puzzle 2

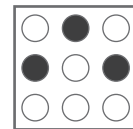
Which option is needed to complete this pattern ?



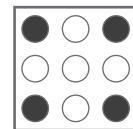
?

www.mathinenglish.com

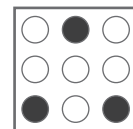
(A)



(B)

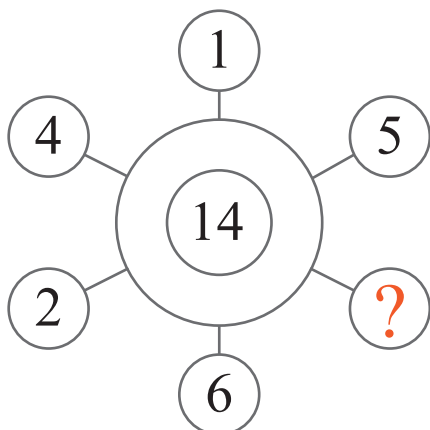


(C)



puzzle 3

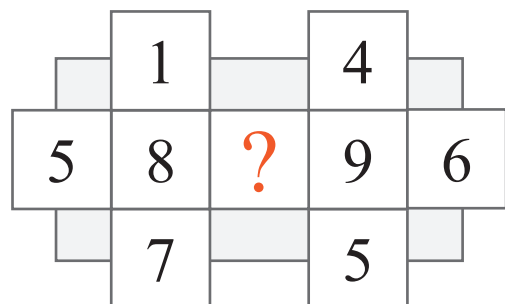
Which number completes this puzzle ?



www.mathinenglish.com

puzzle 4

Which 1-digit number should replace the question mark ?



www.mathinenglish.com

Answer to brain teasers

puzzle 1 : 13

The difference between the opposite numbers is 7. The shapes follow a 5, 6, 7 difference pattern.

puzzle 2 : C

The 3rd square is formed by subtracting the shaded dots of the 2nd square from the 1st.

puzzle 3 : 3

3 and the opposite 4 make 7. Multiply by 2 to give the middle number.

puzzle 4 : 3

3 and 5 add up to the 8 in the middle and 3 and 6 to 9.