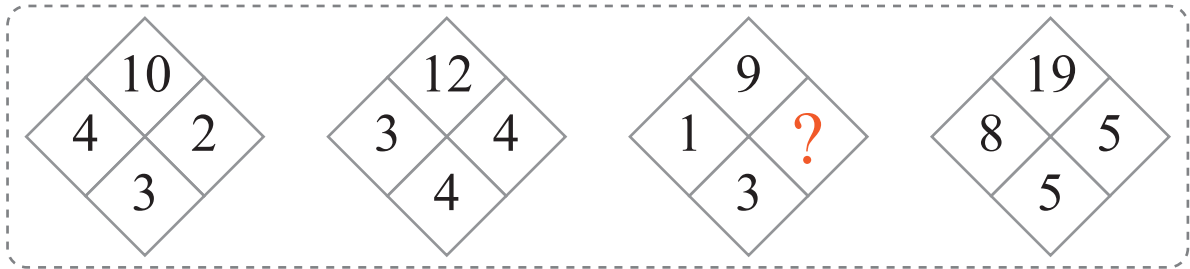


puzzle 1

What is the missing number ?



www.mathinenglish.com

puzzle 2

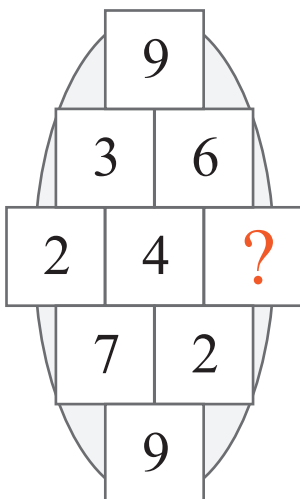
What is the missing time in this pattern ?



www.mathinenglish.com

puzzle 3

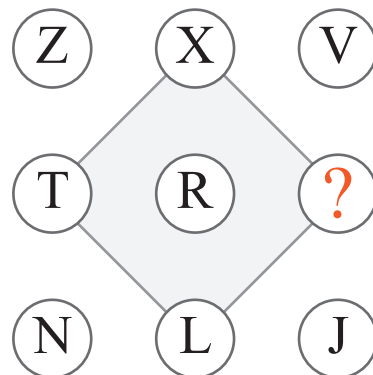
Which number completes this puzzle ?



www.mathinenglish.com

puzzle 4

Which letter should replace the question mark ?



www.mathinenglish.com

Answer to brain teasers

puzzle 1 : 4

Add the lower 3 numbers in each diamond and add 1 to the sum to get the top number.

puzzle 2 : 7:25

Each watch shows a time 40 minutes earlier than the preceding one.

puzzle 3 : 3

Each row adds up to 9.

puzzle 4 : P

Each row follows a decreasing pattern of minus 2 letters.