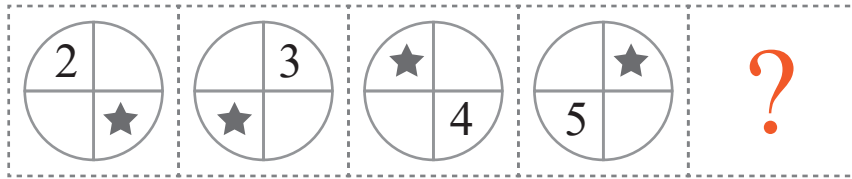


puzzle 1

What is the next shape in the pattern ?

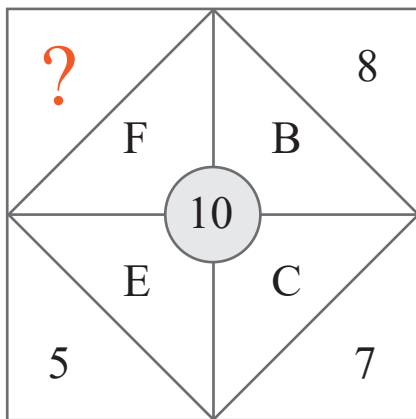


www.mathinenglish.com

- (A)
- (B)
- (C)

puzzle 2


Which number completes this puzzle ?



www.mathinenglish.com


puzzle 3

Which number should replace the question mark ?



puzzle 4

Which number completes the sequence ?



www.mathinenglish.com

Answer to brain teasers

puzzle 1 : A

Each step, the circles and symbols are rotating one step clockwise (90 degrees).

puzzle 2 : 4

4 and the letter value of F equal the center number 10.

puzzle 3 : 1

Divide the left 2 cells in each row by 3 to get the 3rd cell.

puzzle 4 : 16

The pattern is plus 1, minus 3.